

KPSEA 2024 MIRROR



ALL SUBJECTS



A Series of Assessment Questions Prepared by Top KNEC Examiners Nairobi HQ for Academic year 2024.

FOR MORE MARKING SCHEMES:

Contact

Mr Machuki

0724333200/0795491185/0768321553

Email us on kenyaeducators@gmail.com

Or

Visit our website:

www.kenyaeducators.co.ke

**KENYA EDUCATORS
CONSULTANCY**



KPSEA 2024 MIRROR



{KENYA PRIMARY SCHOOL EDUCATION ASSESSMENT}

ENGLISH

Time: 1 Hours 40 Minutes

READ THESE INSTRUCTIONS CAREFULLY.

1. You have been given this question booklet and a separate answer sheet. The question bookier contains 30 questions.
2. Do any necessary rough work in this booklet.
3. When you have chosen your answer, mark it on the **ANSWER SHET**, not in the question paper.

HOW TO USE THE ANSWER SHEET.

4. Use an ordinary pencil only.
5. Make sure that you have written on the answer sheet.

YOUR INDEX NUMBER

YOUR NAME

NAME OF YOUR SCHOOL

6. By drawing a **dark line** inside the correct numbered boxes mark your full index number (i.e. school code Number and the three -figure candidate's Number) in the grid near the top of the answer sheet.
7. Do not make any marks outside the boxes.
8. Keep your answer sheet as clean as possible and Do not fold it."
9. For each question 1-30 four answers are given. The answers are lettered A, B, C, D. In each case **Only One** of the four answers is correct. Chose the correct answer.
10. On the answer sheet show the correct answer by drawing a dark line inside the box in which the letter you have chosen is written.
11. Your dark line Must be within the box. Make your line as dark as possible.
12. For each question **Only One box** is to be marked in each set of four boxes.

Candidates should check the question papers to ensure that all questions are printed.

Read the following conversation and then answer questions 1 to 5.

Elephant: Hey Mr. Hare, did you hear what the king said would be happening soon in this jungle?

Hare: No, I didn't. What did the king say?

Elephant: Mr. Lion sent word all around the jungle that there would be a dancing competition among us.

Hare: How come I did not see him?

Elephant: He did not come around personally. He sent his messenger Miss Jackal.

Hare: When did this information go round?

Elephant: Last Wednesday **during a better part of the afternoon.**

Hare: I guess I did not get the information because on that day I was away looking for some herbs.

Elephant: Well, now you know. Prepare for the same.

Hare: Thank you very much for the information.

1. According to this conversation, who was the king?
 - A. Hare
 - B. Elephant
 - C. Lion
 - D. Jackal
2. Which of the following statements is not true as per this conversation? The
 - A. hare neither saw nor heard the messenger pass the information.
 - B. elephant was well informed about the event of the big day.
 - C. lion did not go round the jungle passing the information.
 - D. hare was not willing to take part in the competition.
3. The hare did not get the information because
 - A. he was away looking for herbs.
 - B. the messenger did not know where he was.
 - C. Miss Jackal did not pass by his place.
 - D. he came home before the messenger passed the message across.
4. How many animals have been mentioned in the conversation?
 - A. Two
 - B. Four
 - C. Five
 - D. Three
5. The phrase **during a better part of the afternoon** has been underlined. What does it imply?

- A. For a long time in the afternoon.
- B. In the afternoon when every animal was present.
- C. From two to three in the afternoon.
- D. When the weather was conducive for the passing of the information.

Read the passage and then answer questions 6 to 9.

Most telephone conversations are different from face to face ones. This is mainly because while talking on phone, we do not normally see the face of the person we are talking with, unless when making a video call. We can tell whether they are happy or not only through what they say. In a face-to-face dialogue, a smile would show friendliness, but in a telephone chat, the smile cannot be seen.

Therefore, when talking on telephone, we need to be careful about the words we use. Polite words like "Please", "Excuse me", "May I," "Thank you", "It's my pleasure" and "I beg your pardon" show that we respect the person we are talking to on phone. We should try to use the words more frequently not only when talking on phone but also in our face-to-face conversations.

- 6. Telephone conversations differ from face-to-face ones in that
 - A. normally in telephone conversations, we don't see each other, unlike in face-to-face.
 - B. face-to-face conversation can be made possible by video calling,unlike in phone chats.
 - C. unlike in face-to-face conversations, smiles can be noticed in phone conversation.
 - D. in face-to-face conversations, costs have to be incurred unlike in telephone conversations.
- 7. How can we tell that one is not friendly in a telephone conversation?
 - A. When they talk loudly.
 - B. Through what they say.
 - C. When they wear a frowny face.
 - D. When they smile through the conversation.
- 8. What is the benefit of using polite word in our conversations according to this passage?
 - A. Using the words raises our dignity.
 - B. When we use polite words, we are able to tell the moods of our friends.
 - C. Using polite words makes us gain respect.
 - D. Using polite words is important because it saves time.
- 9. Polite words
 - A. should be used when making telephone calls only.
 - B. must always be used when talking face-to face with our friends.
 - C. should neither be used on phone nor in face-to-face talks.
 - D. should be used both when making calls or talking to others face-to-face.

Read the passage and then answer questions 10 to 12.

One day, Boni was sent to fetch water from the borehole away from home. He had to use a donkey. He tied four empty plastic jerrycans on the donkey's back. Boni's mother gave him some roasted potatoes and set him off immediately.

Once outside the gate, Boni jumped onto the back of the donkey. He usually enjoyed riding on it.

Suddenly, three huge black dogs appeared from nowhere and started barking while circling the donkey. It kicked several times to keep the fierce dogs away. Then the donkey jumped and sped off dangerously. All this time, Boni was clinging on its back. The jerricans fell off as the donkey galloped away with the dogs chasing it. Boni lost his grip on the donkey's back and fell. He tried to stand but was unable to move his legs. He passed out. When he woke up, he was inside a vehicle with his mother beside him, "Where are we?" he asked her. "We are in an ambulance going to the hospital."

10. What shows that Boni's mother cared about him?
 - A. She sent him to fetch water.
 - B. She gave him some roasted potatoes.
 - C. She chased the black dogs away.
 - D. She accompanied him to the borehole.
11. What did the donkey do to keep the dogs away?
 - A. It galloped away dangerously.
 - B. It let Boni fall off its back with a thud.
 - C. It kicked severally.
 - D. It brayed to frighten the fierce dogs.
12. Why did Boni ask where they were?
 - A. He wanted to know the location.
 - B. His concentration was high.
 - C. The hospital in question was far away.
 - D. He had earlier fainted.

Read the passage and then answer questions 13 to 15.

Children can do many chores at home after school. The chores can be done both indoors and outdoors. Inside the house, they can make their beds, sweep the floor and clean the windows.

They can also wash utensils and prepare meals.

Outside the house, they can cut grass, clean the compound, care for domestic animals and help in the farm. Some people think indoor chores are for girls and outdoor ones are for boys. This is not correct. Both boys and girls should take part in all types of house chores. This way, children will grow up to become useful and responsible members of the society.

13. Why should both boys and girls take part in all types of house chores?
 - A. In order to grow into useful and responsible people.
 - B. Because competition must be cultivated early.

- C. Because it is their right to do so.
 - D. Since doing so makes them stay physically fit.
14. Which of the following chores can be done both inside and outside the house?
- A. Making beds
 - B. Cutting grass
 - C. Sweeping dirt
 - D. Cleaning the compound
15. According to the passage, it is wrong to believe that
- A. some chores can be done in the house.
 - B. some chores can be done outside the house
 - C. some chores are for some people.
 - D. all chores are for both boys and girls.

Read the passage below. It contains blank spaces numbered 16 to 20. For each blank space, select the best alternative from the choices given.

I am sure you have ever taken a walk in the __16__. The atmosphere is peaceful besides the __17__ of birds perched on the branches, rustling of leaves, occasional buzz of __18__ and the rustle of dashing unseen creatures in the __19__. Unfortunately, such places are diminishing and becoming __20__ as demand for land for settlement and projects grow tremendously.

- 16.16.
- A. woods
 - B. tree
 - C. trees
 - D. wood
- 17.17.
- A. chipping
 - B. bleating
 - C. quacking
 - D. chirping
- 18.18.
- A. animals
 - B. insects
 - C. leaves
 - D. branches
- 19.19.
- A. sky
 - B. air.
 - C. undergrowth
 - D. seen
- 20.20.

- A. more and more
- B. fewer and fewer
- C. better and better
- D. stable and stable

For questions 21 to 24, choose the correct order of adjectives to complete the statements.

21. Munju bought a _____ carpet.
- A. red, Indian, new
 - B. red, new, Indian
 - C. new, red, Indian
 - D. new, Indian, red
22. The _____ girl presented the bouquet of flowers to the president.
- A. teenage, beautiful, Kenyan
 - B. teenage, Kenyan, beautiful
 - C. beautiful, Kenyan, teenage
 - D. beautiful, teenage, Kenyan
23. My aunt bought me a _____ jacket.
- A. new, brown, American
 - B. brown, new, American
 - C. new, American, brown
 - D. brown, American, new
24. He drives a _____ car.
- A. green, secondhand, German
 - B. secondhand, green, German
 - C. secondhand, German, green
 - D. green, German, secondhand

For questions 25 to 27, select the correct relative pronoun to complete the sentences.

25. That is the lady _____ handbag was stolen.
- A. who
 - B. whose
 - C. whom
 - D. which
26. To _____ should we address the letter?
- A. who
 - B. where
 - C. whose
 - D. whom
27. The people _____ we met in France have sent us a card.

- A. who
- B. those
- C. whom
- D. which

For questions 28 to 30, choose the best alternative to complete the given sentences

28. The weather was _____ cold for the children to play outside.
- A. very
 - B. too
 - C. so
 - D. quite
29. Kimani was _____ tired that he retired to bed.
- A. so
 - B. very
 - C. too
 - D. extremely.
30. We _____ for fish and chips in the restaurant.
- A. begged
 - B. asked
 - C. demanded
 - D. ordered



KPSEA 2024 MIRROR



{KENYA PRIMARY SCHOOL EDUCATION ASSESSMENT}

INTEGRATED SCIENCE

(Agriculture & Nutrition And Science & Technology)

Time: 1 Hours 40 Minutes

READ THESE INSTRUCTIONS CAREFULLY.

1. You have been given this question booklet and a separate answer sheet. The question bookier contains 50 questions.
2. Do any necessary rough work in this booklet.
3. When you have chosen your answer, mark it on the **ANSWER SHET**, not in the question paper.

HOW TO USE THE ANSWER SHEET.

4. Use an ordinary pencil only.
5. Make sure that you have written on the answer sheet.

YOUR INDEX NUMBER

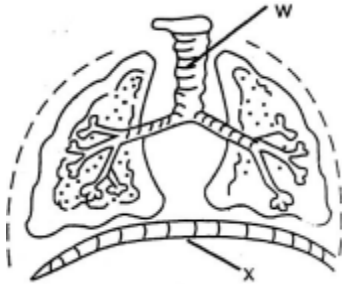
YOUR NAME

NAME OF YOUR SCHOOL

6. By drawing a **dark line** inside the correct numbered boxes mark your full index number (i.e. school code Number and the three -figure candidate's Number) in the grid near the top of the answer sheet.
7. Do not make any marks outside the boxes.
8. Keep your answer sheet as clean as possible and Do not fold it."
9. For each question 1-50 four answers are given. The answers are lettered A, B, C, D. In each case Only One of the four answers is correct. Chose the correct answer.
10. On the answer sheet show the correct answer by drawing a dark line inside the box in which the letter you have chosen is written.
11. Your dark line Must be within the box. Make your line as dark as possible.
12. For each question **Only One box** is to be marked in each set of four boxes.

Candidates should check the question papers to ensure that all questions are printed.

Study the parts of the breathing system below.



1. Name the part marked x

- A. diaphragm
- B. lungs
- C. trachea
- D. nose

2. Kipchoge had the following signs:-

- i. Fever
- ii. Fatigue and joint pains
- iii. Difficulty in breathing

He was suffering from a disease called:-

- A. Covid 19
- B. Malaria
- C. Cough
- D. AIDS

3. Which one of the following is **not** a safety measure when using heat?

- A. Do not play with fire
- B. Do not run near fire
- C. Keep matches near children
- D. Always follow instructions

4. Which one is **not** a function of plants roots?

- A. Make food
- B. Absorb water
- C. Store food
- D. Anchorage

5. Animals without backbone are called:-

- E. Vertebrates
 - F. Invertebrates
 - G. Mammals
 - H. Insects
6. Which one of the following plants is used in baking breads?
- A. Yeast
 - B. Toadstool
 - C. Mould
 - D. Mushrooms
7. The diagram below shows a type of plant found in the locality. The plant is called:-



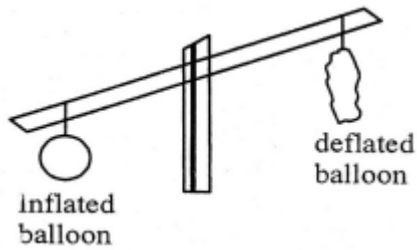
- A. tree
 - B. shrub
 - C. A herb
 - D. grass
8. The diagram below shows fruits falling from a tree.



The force that makes the fruits to fall is called:-

- A. push
 - B. gravity
 - C. convectional
 - D. voluntary
9. The process through which solids change directly to gases is called:-
- A. Evaporation
 - B. condensation
 - C. sublimation
 - D. deposition

10. Grade five learners did the experiment below. The experiment shows that:-



- A. gases have mass
- B. gases have shape
- C. gases expand
- D. balloons have mass

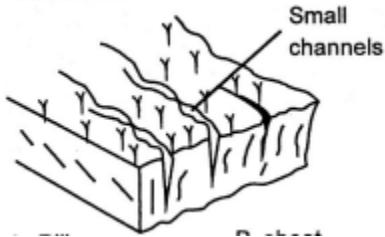
11. Sound travels in _____ direction.

- A. one
- B. a straight
- C. all
- D. upward

12. Which one of the following is an external parasite?

- A. Tapeworm
- B. Jigger
- C. Roundworm
- D. Pin worm

13. The diagram below shows a type of soil erosion called:-



- A. Rill
- B. sheet
- C. gully
- D. splash

14. The soil that retains a lot of water is :-

- A. loam
- B. clay
- C. sandy
- D. gravel

15. Which material below cannot make a compost heap?

- A. Dry leaves
- B. Kitchen remain
- C. Animal droppings
- D. Polythene papers

16. Innovative gardening can be placed in all these areas **except-**

- A. Pavements
- B. Walls
- C. Trees
- D. Tables

17. The ability of soil to regain its original fertility is called soil

- A. recovery.
- B. erosion.
- C. profile.
- D. acidity

18. We scare animals from the farm using:-

- A. traps
- B. noise
- C. fire
- D. guns

19. The following are changes that take place during adolescence:

- A. Production of sex cells.
- B. Broadening of hips.
- C. Deepening of voice.
- D. Increase in weight and height
- E. Menstruation.

Which of the changes above take place in both adolescent boys and girls?

- A. ii, v

- B. i, iv
- C. iii, iv
- D. ii, iv

20. The stage of growth between the age of 13 and 19 years old is called:-

- A. pre-adolescence
- B. adolescence
- C. adulthood
- D. pre-teen

21. Perfumes and make-ups are examples of

- A. needs.
- B. lotions.
- C. accessories.
- D. cosmetics.

22. Changes in adolescence that can be seen are called:-

- A. emotional changes
- B. physical changes
- C. social changes
- D. mental changes

23. Which one is **not** a way of maintaining good grooming by an adolescent?

- A. Bathing once a week
- B. Girls changing sanitary towels during menstruation
- C. Shaving hair under armpits
- D. Wearing clean clothes

24. Which one of these is **not** made using wool?

- A. Sweaters
- B. Blankets
- C. Suits
- D. Shirts

25. Gulley erosion is controlled by:-

- A. planting cover crops
- B. Mulching
- C. making gabbions
- D. trash lines

26. We get pork from a domestic animal called:-

- A. fish
- B. pig
- C. camel
- D. goat

27. Which crop is the odd one out?

- A. Rice
- B. Yams
- C. Arrowroots
- D. Cassava

28. When ripe, the colour of passion fruits is:-

- A. green
- B. purple
- C. orange
- D. red

29. The removal and carrying away of soil by rain or wind is called:-

- A. soil conservation
- B. soil erosion
- C. sedimentation
- D. soil formation

30. Which of the following gardening practices conserves soil moisture?

- A. Weeding
- B. Pruning
- C. Digging
- D. Mulching

31. We get manure from all the following **except**:-

- A. chicken
 - B. cows
 - C. sheep
 - D. dogs
32. Which one below is **not** a neatening stitch?
- A. Blanket stitches
 - B. Overcasting stitches
 - C. hemming stitches
 - D. chain stitches
33. The method of cooking foods totally covered in **hot** cooking fat or oil is called:-
- A. dry fat frying
 - B. shallow frying
 - C. boiling
 - D. deep frying
34. The following are advantages of using a shopping list. Which one is **not**?
- A. It saves time
 - B. It reduces waste
 - C. It helps us to buy what we need most
 - D. It enables us buy a lot of items
35. Which one of the following is a service?
- A. Bread
 - B. Catering
 - C. Milk
 - D. Cabbage
36. A light spear designed for throwing is called a
- A. javelin.
 - B. bat.
 - C. cross bar.
 - D. shot put.
37. Which commands is **not** used in starting race:-
- A. get set

- B. on your marks
- C. go
- D. on your set

38. Each team in a volleyball match has players.

- A. twelve
- B. eleven
- C. seven
- D. six

39. Which disease can be prevented through participating in running activities?

- A. Obesity
- B. Diarrhoea
- C. Malaria
- D. Tetanus

40. Which material would be most appropriate for a long jump land area?

- A. clay soil
- B. thorny grass
- C. saw dust
- D. murrum

41. The approximate weight of an improvised disc for discus should be between _____ and _____

- A. $\frac{1}{2}$ kg and 1kg
- B. $2\frac{1}{2}$ kg and 3kg
- C. four kg
- D. five kg

42. We can prevent injuries while performing skier by :-

- A. closing eyes
- B. keeping safe distance
- C. keeping eye wide open
- D. keeping close distance

43. Name one quality of a good qualified player:

- A. not flexible

- B. slow in running
 - C. weak body posture
 - D. ability to drop the ball
44. The act of touching post by the fielder using the hand with the ball in rounders is known as:-
- A. thumping
 - B. jumping
 - C. stamping
 - D. handling
45. Which one is **not** a pass used in soccer?
- A. outside of the foot
 - B. push pass
 - C. wall pass
 - D. under arm pass
46. The exercises that are done for recovery from a physical activity is called:-
- A. warm up
 - B. cool down
 - C. jogging
 - D. frog jump
47. Which one of the plants grows where the soil lacks nitrates?
- A. Bracket tree
 - B. Moss
 - C. Buttercup
 - D. Lichens
48. All the following are outfield players in softball except the
- A. right fielder.
 - B. left fielder.
 - C. first baseman.
 - D. center fielder.
49. Three of the following equipment are used in rugby except
- A. a tag belt.

- B. training cones.
- C. a rugby ball
- D. discs.

50. Which of the following is not a type of bounce in rope work?

- A. Single bounce.
- B. Double bounce.
- C. One foot bounce.
- D. Two feet bounce.



KPSEA 2024 MIRROR



{KENYA PRIMARY SCHOOL EDUCATION ASSESSMENT}

KISWAHILI

Muda: Saa 1

SOMA KWA MAKINI MAAGIZO YAFUATAYO.

1. Umepeva kijitabu hiki cha maswali na karatasi ya kujibia. Kijitabu hiki kina maswali 30.
2. Ikiwa utataka kuandika chochote si jibu andika katika kijitabu hiki.
3. Ukisha chagua jibu lako ionyeshe katika KARATASIYAMA JIBU na wala sio katika kijitabu hiki cha maswali.

JINSI YA KUTTIMIÁ KARATASI YA MAJIBU.

4. Tumia penseli ya kawaida. 5. Hakikisha ya kwamba yafuatayo yameandikwa katika karatasi ya majibu.

NAMBARIYAKO YA MTHANI

JINA LAKO

JINA LA SHULE SHULE YAKO

6. Kwa kuchora kistari katika visanduku vyenye namba zinazokuhusu, onyesha namba ako kamili ya mthani yaani namba ya shule, na zile namba tatu za mthaniwa) katika sehemu iliyotengwamwanzo wa karatasi ya majibu.
7. Usitie alama zozote nje ya visanduku,,
8. Iweke safi karatasi yako ya maibu.
9. Kwakila swali 1-30 umepewamajibu manne. Majibu'ha o yameonyeshwakwä herufi A, B,D naD. Ni jibu **MOJA** tu kati ya hayo manne ambalo ni sahihi. Chagua jibu hilisi
10. Kwenye karatasi ya majibu,jibu sahihi lionyeshwe kwakuchora kistari katika kisanduku chenye herufi uliyochagua kuwa ndilojibu.
11. Chora kistari chako vizuri. Kistari chako kiwe cheusi na kisijitokeze nje ya kisanduku.
12. Kwakila swali, chora kistari katika kisanduku kimoja tu kati ya visanduku ulivyopewa.

Candidates should check the question papers to ensure that all questions are printed.

SEHEMU YA KWANZA (Alama 5)

Kusikiliza na kuzungumza

Soma mazungumzo yafuatayo kisha ujibu maswali.

(Mama ameketi kochini akifuma sweta. Anaiwacha shughuli yake anapomwona Amara)

Amara: *(akimkaribia mama)* Shikamoo mama?

Mama: *(kwa tabasamu)* Marhaba binti yangu! Umeshindaje shuleni?

Amara: Vyema mama! *(kimya)* Nikwambie tuliyoayasoma?

Mama: Naam, niambie mwanangu.

Amara: Tulifunzwa kuhusu mabadiliko ya hali ya anga.

Mama: Mafunzo mazuri sana. Ni kweli kuwa hali ya anga hubadilikabadilika na kuleta misimu mbalimbali.

Amara: Lakini mama, sikuelewa vizuri kwa sababu nilikuwa nikisinzia kwa sababu ya mafua.

Mama: Pole! Nitajaribu kukuelezea. Kwanza kuna msimu wa kiangazi ambao huwa na jua kali. Hali hii huleta ukame.

Amara: Je, kuna kipupwe?

Mama: Naam mwanangu. Hukupitwa na kila kitu. Kipupwe ni majira ya baridi kali. Wakati huu watu wanafaa kuvaa mavazi mazito ili kupata joto.

Amara: Ninaelewa mama. Nakumbuka pia kuna msimu wa mvua nyingi bali sikumbuki jina lake.

Mama: Msimu au majira haya huitwa masika. Sanasana wakati huu wakulima hupanda kwa sababu kuna maji ya kutosha. Isitoshe huwa kuna mafuriko na watu hufaa kutahadhari.

Amara: Kuna msimu unaitwa kivuli?

Mama: Sio kivuli mwanangu. Ni vuli au mchoo. Wakati huu mvua huwa ndogondogo.

Amara: *(Kwa furaha)* Umeelezea misimu minne na ninakumbuka mwalimu akisema kuwa angetufunza minne.

Mama: Nina furaha kuwa nimeweza kukusaidia kuelewa zaidi yale mliyofunzwa shuleni leo.

Amara: Asante mama! Hakika umenifaa sana.

1. Amara alipoulizwa na mama alivyoshinda shuleni alimjibu vipi?
 - A. Naam
 - B. Vyema
 - C. Shikamoo
 - D. Marhaba
2. Maneno yafuatayo yametumiwa katika mazungumzo. Lipi halionyeshi adabu?

- A. Pole
 - B. Naam
 - C. Asante
 - D. Je
3. Ni jibu lipi linaloonyesha misimu ambayo mama alimfunza Amara?
- A. Kivuli, ukame, mchoo, masika
 - B. Ukame, kiangazi, masika, kipupwe
 - C. Kipupwe, kiangazi, vuli, masika
 - D. Masika, kivuli, kiangazi, kipupwe
4. Ni kauli gani si sahihi kulingana na mazungumzo haya?
- A. Amara hakuelewa chochote darasani.
 - B. Amara alikuwa na ugonjwa wa malaria
 - C. Akina amara walifundishwa kuhusu misimu mbalimbali.
 - D. Mama yake Amara anaelewa misimu vizuri.
5. Neno misimu limetumika katika mazungumzo kisawe chake ni gani?
- A. Anga
 - B. Majira
 - C. Ukame
 - D. Mabadiliko

Swali la 6 hadi la 9

Soma kifungu kifuatacho kisha ujibu maswali.

Hospitali kuu ya Ubora inapatikana katika kaunti ya Kinga. Hii ni mojawapo ya hospitali nyingi katika kaunti hii. Hospitali hii imegawanywa katika sehemu tofauti kila moja ikishughulikia ugonjwa mmoja. Hospitali hii ni ya kipekee. Wagonjwa wengi huenda hapa wanapougua.

Madaktari wa Ubora ni wenye bidii ya mchwa. Huwa wanashughulika kama nyuki mzingani. Kila mmoja huwa anahudumia wagonjwa wake kwa upendo na heshima. Wauguzi pia husaidiana na madaktari ili kuhakikisha wagonjwa wamepata tiba inayofaa na kwa haraka. Hakuna anayefanya uzembe kazini kisa na maana wanaamini kuwa bidii huleta ufanisi. Wapo wanaoshughulikia magonjwa ya kuambukiza, matatizo ya macho, shida za mifupa, ndwele za mfumo wa hewa, moyo na magonjwa mengineyo. Hakika, kila mmoja huwa na shughuli yake.

Jitihada za wafanyakazi wa hospitali hii huwasaidia wagonjwa wengi kupata matibabu na kuwa na afya bora. Hakujawahi kuwa na visa vya wagonjwa kutohudumiwa vyema hapa. Magonjwa ya aina zote hukabiliwa. Isitoshe huwashauri watu kujikinga na maradhi kwani kinga ni bora kuliko tiba. Aidha huwatuma madaktari kufundisha umma kuhusu umuhimu wa afya bora na za kuzuia magonjwa. Kusema kweli hakuna hospitali nyingine katika kaunti ya Kinga inaishinda hii.

6. Ni jibu lipi sahihi kulingana na aya ya kwanza?
 - A. Katika kaunti ya Kinga kuna hospitali moja tu.
 - B. Magonjwa yote hutibiwa sehemu moja.
 - C. Hospitali ya Ubora hushughulikia magonjwa machache.
 - D. Hospitali ya Ubora ndiyo bora zaidi kauntini.
7. Kulingana na aya ya pili ni sehemu gani ndani ya mwili huathiriwa na shida ya mfumo wa hewa?
 - A. Figo
 - B. Kibofu
 - C. Mapafu
 - D. Moyo
8. Ni njia gani madaktari. huwasaidia wananchi kujikinga na magonjwa?
 - A. Kuwashauri kujikinga na maradhi.
 - B. Kuwatibu haraka.
 - C. Kushirikiana na wauguzi.
 - D. Kuwafundisha kuhusu lishe bora.
9. Ni Methali gani imetumika katika kifungu hiki?
 - A. Bidii ya mchwa
 - B. Kila mmoja huwa na shughuli yake
 - C. Shughulika kama nyuki mzingani
 - D. Kinga ni bora kuliko tiba

Swali la 10 hadi la 12

Soma kifungu kifuatacho kisha ujibu maswali.

Wanafunzi wa gredi ya sita katika shule ya msingi ya Busara wamegawanywa katika makundi manne. Makundi haya ni: Upendo, Amani, Subira na Umoja. Kila kikundi huwa na sehemu tatu za kutunza usafi kila juma.

Tazama jedwali la juma hili kisha ujibu maswali.

VIKUNDI	JUMATATU	JUMATANO	IJUMAA
Upendo	darasani	chumba cha maakuli	msalani
Amani	msalani	majilisini	darasani
Subira	chumba cha maakuli	msalani	majilisini
Umoja	majilisini	darasani	chumba cha maakuli

10. Ni kikundi kipi hakikusafisha darasa?

- A. Subira
 - B. Amani
 - C. Umoja
 - D. Upendo
11. Ni kikundi kipi hakikusafisha majilisi?
- A. Subira
 - B. Umoja
 - C. Upendo
 - D. Amani
12. Ni kikundi kipi hakikusafisha chumba cha **maakuli**?
- A. Upendo
 - B. Amani
 - C. **Subira**
 - D. **Umoja**

Swali la 13 hadi la 15

Soma kifungu kifuatacho kisha ujibu maswali.

Ugali ni chakula kinachopendwa na watu wengi sana. Njia ya kupika si ngumu. Kwanza, lazima uwe na unga wa mahindi, *maji*, sufuria, mwiko na jiko la kupikia lenye moto. Pima kiasi cha maji unayohitaji na kuyatia kwenye sufuria safi. Injika sufuria. Yapatie maji muda yachemke. Tia unga kidogo kidogo ndani ya maji yanayochemka, huku ukikoroga kwa mwiko. Ongeza unga kulingana na unavyotaka ugali wako uwe. Ukitaka ugali mgumu, endelea kuongeza unga. Ngoja ugali uive kwa joto la wastani.

Ugali huandaliwa kwa vitoweo vya aina mbalimbali kama vile: Maziwa yaliyochachuka, mboga za kiasili kama vile mchicha, samaki au nyama. Kusema kweli ugali ni chakula cha kipekee.

13. **Hatua ya kwanza** ya kupika **ugali** ni ipi?
- A. **Kuwa** na vitu utakavyohitaji kupika ugali.
 - B. Kuinjika sufuria **yenye maji** jikoni.
 - C. Kuchukua mwiko na **kuanza** kukoroga.
 - D. Kuwa na kitoweo **ambacho** unahitaji.
14. Neno injika lina **maana gani**?
- A. Kuosha
 - B. **Kuweka sufuria jikoni**
 - C. **Kuchoma**
 - D. Kuchemsha
15. **Ugali** humwongeza **mtu** _____ **mwilini**.
- A. Udhaifu

- B. Urefu
- C. Unyonge
- D. Nguvu

Swali la 16 hadi la 20

Soma kifungu kifuatacho. Kwa kila swali umepewa majibu manne. Chagua jibu lifaalo zaidi kati ya yale uliyopewa.

Johari alishiriki ___16___ michezo tofauti tukiwa shuleni. Michezo ___17___ alipenda sana ni kandanda na kuogelea. ___18___ na timu ya mchezo wa kandanda alipoingia gredi ___19___ nne. Alifanya bidii na kuiletea timu yake ushindi. Alifahamu kuwa ___20___.

	A	B	C	D
16.	kwa	kwenye	katika	ndani ya
17.	ambapo	ambayo	ambazo	ambako
18.	Alikuunga	Aliwaunga	Alijiunga	Alituunga
19.	ya	wa	la	za
20.	kidole kimoja hakivunji chawa	mtaka cha mvunguni sharti ainame	asiyesikia la mkuu huvunjika guu	mtoto umleavyo ndivyo akuavyo

Swali la 21 hadi la 30

Chagua jibu sahihi.

21. Kiungo hiki cha mwili kinaitwaje?



- A. Figo

- B. Ini
C. Moyo
D. Pafu
22. Nomino hizi ni za aina gani? Wingu la nzige, pakacha la matunda, bunda la noti na robota la pamba.
A. Kawaida
B. Wingu
C. Makundi
D. pekee
23. Chagua wingu wa: Ukuta mrefu umejengwa na fundi mzuri.
A. Kuta ndefu zimejengwa na mafundi wazuri.
B. Kuta ndefu zimejengwa na fundi wazuri.
C. Ukuta mrefu zimejengwa na fundi wazuri.
D. Kuta ndefu zimejengwa na mafundi wabaya.
24. Tenda ni kwa tendea, chora ni kwa _____
A. Choresha
B. Chorea
C. Choresha
D. Choreshea
25. Ni kauli gani sahihi kuhusu bendera ya Kenya?
A. Ina rangi tano
B. Katikati imechorwa mkuki na ngao
C. Rangi ya juu ni kijani
D. Rangi ya chini ni nyeusi
26. Kati ya Maneno haya gani si la adabu?
A. Asante
B. Tafadhali
C. Karibu
D. Ninataka
27. Chagua ukubwa wa sentensi ifuatayo: Mlango wa nyumba yake unapendeza.
A. Lango la jumba lake linapendeza.
B. Mlango wa jumba lake linapendeza.
C. Lango la nyumba yake linapendeza.
D. Mlango wa nyumba yake linapendeza.
28. Chagua jibu **lisilo** sahihi.
A. Watano ni kivumishi cha idadi
B. Mimi ni kiwakilishi cha nafsi
C. Huyu ni kivumishi kiashiria
D. Gani? ni kivumishi cha sifa
29. Ni nini maana ya msembo **kupiga chafya**?
A. Kuchemua.
B. Kukohoa.
C. Kutema.

- D. Kupenga.
30. Sentensi hii imetumia tamathali gani ya lugha. Bawabu wetu ni mkali kama simba.
- A. Istiara
 - B. Methali
 - C. Tashbihi
 - D. Kitendawili

Blank lined area for writing or marking.



KPSEA 2024 MIRROR



{KENYA PRIMARY SCHOOL EDUCATION ASSESSMENT}

MATHEMATICS

Time: 1 Hours 40 Minutes

READ THESE INSTRUCTIONS CAREFULLY.

1. You have been given this question booklet and a separate answer sheet. The question bookier contains 30 questions.
2. Do any necessary rough work in this booklet.
3. When you have chosen your answer, mark it on the **ANSWER SHET**, not in the question paper.

HOW TO USE THE ANSWER SHEET.

4. Use an ordinary pencil only.
5. Make sure that you have written on the answer sheet.

YOUR INDEX NUMBER

YOUR NAME

NAME OF YOUR SCHOOL

6. By drawing a **dark line** inside the correct numbered boxes mark your full index number (i.e. school code Number and the three -figure candidate's Number) in the grid near the top of the answer sheet.
7. Do not make any marks outside the boxes.
8. Keep your answer sheet as clean as possible and Do not fold it."
9. For each question 1-30 four answers are given. The answers are lettered A, B, C, D. In each case Only One of the four answers is correct. Chose the correct answer.
10. On the answer sheet show the correct answer by drawing a dark line inside the box in which the letter you have chosen is written.
11. Your dark line Must be within the box. Make your line as dark as possible.
12. For each question **Only One box** is to be marked in each set of four boxes.

Candidates should check the question papers to ensure that all questions are printed.

1. In a wedding ceremony, Grade six learners carried 2 342 chairs. They later went for 1 009 more chairs. Out of these, 1 810 were used. How many were not used?
 - A. 1 641
 - B. 1 541
 - C. 1 531
 - D. 1 631
2. In an Agricultural Exhibition, there were 324 867 participants. What is the place value of digit 2 in this number?
 - A. Hundreds.
 - B. Tens of thousands.
 - C. Thousands.
 - D. Hundreds of thousands.
3. Work out the LCM of 8 and 12.
 - A. 2
 - B. 12
 - C. 32
 - D. 24
4. Round off 43 866 to the nearest hundred.
 - A. 43 900
 - B. 43 860
 - C. 44 000
 - D. 43 800
5. Out of 12 864 chickens in a school, 6 028 were cocks and the rest were hens. How many hens were there?
 - A. 18 892
 - B. 18 792
 - C. 6 836
 - D. 6736
6. The distance between town X and town Y is 2 700m. How many kilometres and metres are between the two towns?
 - A. 2km 700m
 - B. 27km 00m
 - C. 2km 700m
 - D. 270km 00m

7. Mwende has a square piece of cloth whose side is **18cm**. What is the area of the piece of cloth?
- 36cm^2
 - 360cm^2
 - 324cm^2
 - 334cm^2
8. Kilo carried **29kg** of maize while Kaloki carried **33kg** of sorghum. What was the total mass carried by the two?
- 957kg
 - 602kg
 - 952kg
 - 62kg
9. How many $\frac{1}{4}\text{kg}$ packets can be obtained from **9kg**?
- 36
 - 18
 - 4
 - 24
10. A tuktuk covered **16km 61m** while a motorbike covered **18km 95m**. What was the total distance covered?
- 34km 156m
 - 35km 56m
 - 34km 56m
 - 35km 156m
11. Work out:
- | hrs | mins |
|------------------------------------------------------------------------------------------------------------------------------------|------|
| 5 | 16 |
| x _____ | 7 |
| <ol style="list-style-type: none"> 35hrs 52mins 36hrs 112mins 35hrs 112mins 36hrs 52mins | |
12. Calculate the length of one side of a square whose area is **289cm²**
- 27cm
 - 14cm
 - 17cm
 - 16cm
13. In the first attempt, an athlete finished a marathon race in 3. 45 hours. In the second attempt, he reduced the time by 1.09 hours. What time did he take in the second attempt?
1. 36 hours
 2. 36 hours

- C. 4. 54 hours
D. 3.54 hourS
14. Fractions, $\frac{3}{10}$, $\frac{7}{10}$, $\frac{5}{10}$ and $\frac{9}{10}$ were to be arranged from the smallest to the largest which of the following would be the correct arrangement?
A. $\frac{9}{10}$, $\frac{7}{10}$, $\frac{5}{10}$, $\frac{3}{10}$
B. $\frac{3}{10}$, $\frac{5}{10}$, $\frac{7}{10}$, $\frac{9}{10}$,
C. $\frac{9}{10}$, $\frac{5}{10}$, $\frac{7}{10}$, $\frac{3}{10}$
D. $\frac{3}{10}$, $\frac{7}{10}$, $\frac{5}{10}$, $\frac{9}{10}$
15. Work out:
361 x 18
A. 6 488
B. 6 398
C. 5 488
D. 6 498
16. One hundred and eight seedlings were to be shared equally among twelve farmers. How many seedlings would each farmer get?
A. 19
B. 1 111
C. 1 296
D. 9.
17. An NGO organisation donated 1291 600kg of maize to be shared equally among 8 boarding schools in a sub county. What mass of maize did each school get?
A. 16t 1600kg
B. 15t 200kg
C. 16t 200kg
D. 15t 1600kg
18. Petrol in a **40** litres **800**ml container was emptied to fill **8** equal containers. What was the capacity of each container?
A. 50 litres 10ml
B. 5 litres 100ml
C. 5 litres 10ml
D. 50 litres 100mi
19. Joan bought three bens each sh. 400. She later sold them for sh. 550 each. What was her profit
A. Sh. 1 650
B. Sh. 1 200
C. Sh. 450

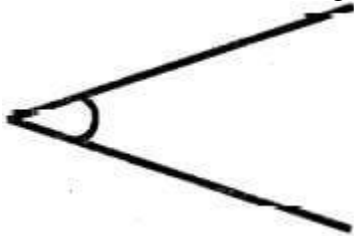
D. Sh. 550

20. A boy stood in the field facing south. How should the boy turn in order to face east?

Make a

- A. quarter turn to his left.
- B. quarter turn to his right.
- C. full turn to his left.
- D. half turn to his right.

21. Mr Hisabati drew an angle like the one shown below.



What is the name of the angle?

- A. Obtuse angle.
- B. Reflex angle.
- C. Acute angle.
- D. Right angle.

The table below shows the sale of milk in Mwanda's farm for a period of five days. Use it to answer the following questions.

Day	Amount sold in litres
Monday	146
Tuesday	230
Wednesday	180
Thursday	290
Friday	410

22. How many less litres of milk were on Wednesday than on Friday?

- A. 590ℓ
- B. 130ℓ
- C. 230ℓ

- D. 490ℓ
23. Which two consecutive days recorded the **lowest** sale of milk?
- A. Monday and Tuesday.
 - B. Tuesday and Wednesday.
 - C. Wednesday and Thursday.
 - D. Thursday and Friday.
24. How much milk was sold on Monday, Tuesday and Thursday?
- A. 1 256ℓ
 - B. 1 246ℓ
 - C. 656ℓ
 - D. 666ℓ
25. How much milk was sold on Monday, Tuesday and Thursday?
- A. 1 256ℓ
 - B. 1 246ℓ
 - C. 656ℓ
 - D. 666ℓ
26. Which one of the following lists shows money paid by the public to a county government of Kenya?
- A. Land fees, school fees, parking fee, cess
 - B. Market fees, cess, business permit, security fee
 - C. Market fees, business permit, cess, parking fee
 - D. Land fees, security fee, business permit, parking fee
27. Which of the following statements does **not** describe a rectangle? It has
- A. four equal sides.
 - B. four equal angles.
 - C. two pairs of equal sides.
 - D. each of its angles measuring 90 Degrees

28. A father bought ℓ hens. A mother bought **16** more hens. In total, **25** hens were bought. How many hens did the father buy?
- A. 19
 - B. 9
 - C. 41
 - D. 8
29. Mariarosa received x beads after their teacher divided **125** beads equally among **5** of them. How many beads did Mariarose get?
- A. 25
 - B. 35
 - C. 15
 - D. 45
30. A carpenter made **32** cupboards, **18** tables and y stools. If the total number of furniture was **63**, how many stools were made?
- A. 23
 - B. 13
 - C. 50
 - D. 53



KPSEA 2024 MIRROR



{KENYA PRIMARY SCHOOL EDUCATION ASSESSMENT}

CREATIVE ARTS, SOCIAL STUDIES & RELIGIOUS EDUCATION

Time: 1 Hours 40 Minutes

READ THESE INSTRUCTIONS CAREFULLY.

1. You have been given this question booklet and a separate answer sheet. The question bookier contains 50 questions.
2. Do any necessary rough work in this booklet.
3. When you have chosen your answer, mark it on the **ANSWER SHET**, not in the question paper.

HOW TO USE THE ANSWER SHEET.

4. Use an ordinary pencil only.
5. Make sure that you have written on the answer sheet.

YOUR INDEX NUMBER

YOUR NAME

NAME OF YOUR SCHOOL

6. By drawing a **dark line** inside the correct numbered boxes mark your full index number (i.e. school code Number and the three -figure candidate's Number) in the grid near the top of the answer sheet.
7. Do not make any marks outside the boxes.
8. Keep your answer sheet as clean as possible and Do not fold it."
9. For each question 1-50 four answers are given. The answers are lettered A, B, C, D. In each case Only One of the four answers is correct. Chose the correct answer.
10. On the answer sheet show the correct answer by drawing a dark line inside the box in which the letter you have chosen is written.
11. Your dark line Must be within the box. Make your line as dark as possible.
12. For each question **Only One box** is to be marked in each set of four boxes.

Candidates should check the question papers to ensure that all questions are printed.

1. Which one is NOT a 3-D artwork?
 - A. sculpture
 - B. pottery
 - C. drawing
 - D. marionette
2. The following are techniques used to decorate a modelled clay pot. Which one is NOT?
 - A. Incising
 - B. Embedding
 - C. Tie and dye
 - D. Stamping
3. Which one is NOT a primary colour?
 - A. Green
 - B. Blue
 - C. Yellow
 - D. Red
4. Grade six learners were told by their Art and Craft teacher to make a collage. Which of the materials is NOT needed?
 - A. water
 - B. sand
 - C. glue
 - D. picture from a newspaper
5. Mama Joyce makes pots for sale. Which one of the following materials she does not use?
 - A. water
 - B. clay soil
 - C. sharp objects
 - D. metal strips
6. Which one is NOT used in making a wax crayon?
 - A. paint
 - B. Bel wax
 - C. paraffin wax
 - D. colour pigment
7. Which factor is NOT considered when drawing two overlapping cylindrical forms?
 - A. Proportion of forms
 - B. Balance of forms
 - C. Variation of lines
 - D. Inadequate space
8. The following are conventional mounting materials except:-
 - A. Banana fibres
 - B. Manilla paper
 - C. Mounting board
 - D. Catridge paper

9. Primary colours when mixed with secondary colours in equal amounts will produce _____ colours.

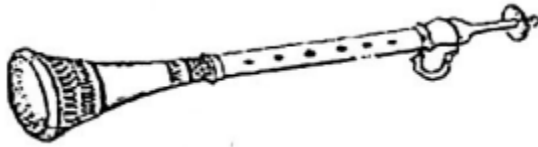
- A. Black
- B. Rainbow
- C. Tertiary
- D. Secondary

10. Which shading technique is used in the cup below?



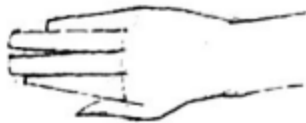
- A. coiling
- B. stripling
- C. cross hatching
- D. Tonal variation

11. Which Musical instrument is drawn below?



- A. Nzumari
- B. Bung'o
- C. Chivoti
- D. Biringi

12. Which sound is represented by the hand sign below?



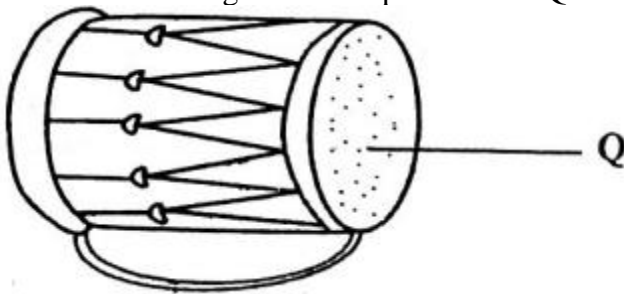
- A. d
- B. m
- C. f
- D. r

13. A flute is played by:-

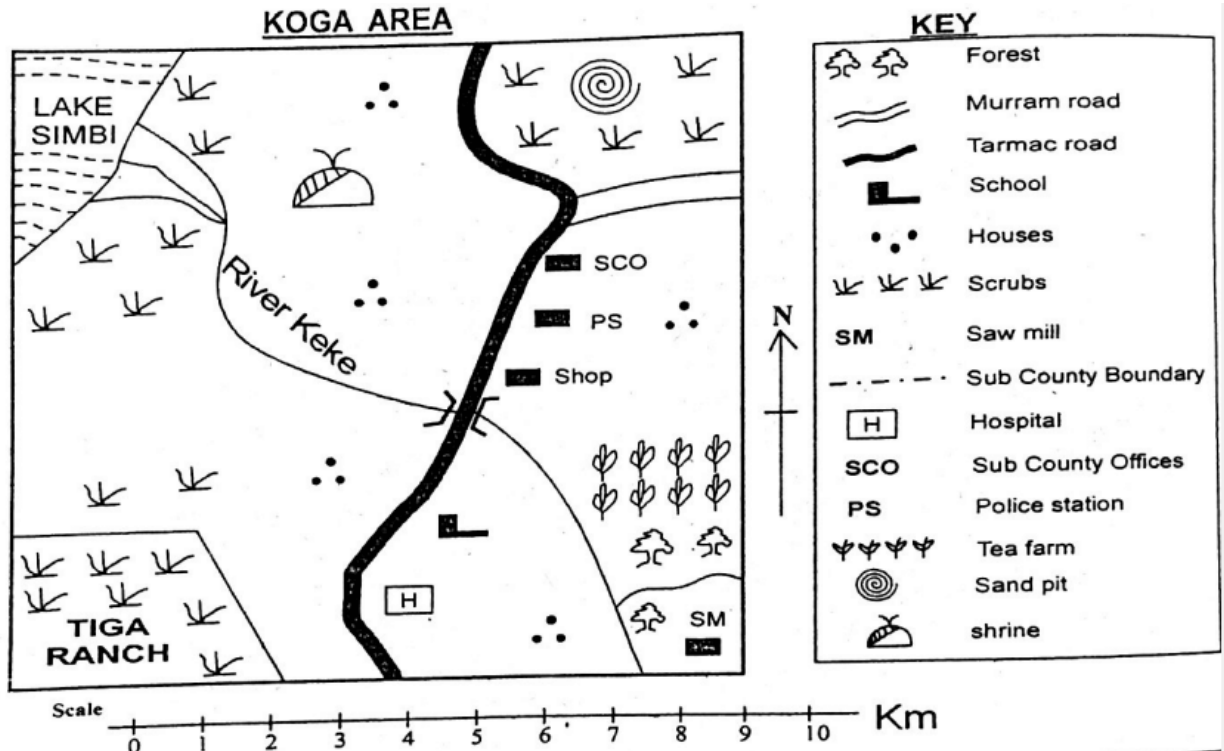
- A. bowing
- B. shaking
- C. blowing
- D. hitting

14. Which one is NOT a part of a quaver

- A. head
 - B. tail
 - C. stem
 - D. abdomen
15. Which one of the following is a way appreciating rhythms? By
- A. Crying
 - B. Wailing
 - C. Walking
 - D. Clapping
16. The arrangement of notes of different pitches and directions sung is called:-
- A. Rhythm
 - B. Tempo
 - C. Melody
 - D. mood
17. Dancers decorate their bodies using paints to make patterns. This is called:-
- A. Body ornaments
 - B. Body costumes
 - C. Body colouring
 - D. Body adornment
18. Songs sung to soothe babies is classified as:-
- A. Sacred songs
 - B. Lullaby songs
 - C. Folk songs
 - D. Action songs
19. What is the name given to the part marked Q in the musical instrument below?



- A. Membrane
 - B. Sound box
 - C. Sling
 - D. Resonator
20. Which one of the following countries does NOT sing the East African Anthem?
- A. Uganda
 - B. Ethiopia
 - C. Rwanda
 - D. Democratic Republic of Congo



21. What is the direction of the sand pit from Tiga Ranch?
 - A. South West
 - B. North East
 - C. South East
 - D. North West
22. Most people in Koga area are mainly:-
 - A. Traditionalists
 - B. Muslims
 - C. Pagans
 - D. Christians
23. Which economic activity is NOT likely to be carried out in Koga Area?
 - A. Mining
 - B. Lumbering
 - C. Cattle keeping
 - D. Fishing
24. Which feature is NOT found along River Keke?
 - A. Estuary
 - B. Delta
 - C. Confluence
 - D. Tributaries

25. What is the climate of South East part of Kega Area?
- A. Hot and dry
 - B. Hot and Wet
 - C. Cool and Wet
 - D. Cool and warm

Study the poster below.

TAXES	GRANTS
LOANS	COUNTERFINES

26. From the above posters, the message communicated is
- A. types of expenditure
 - B. sources of foreign exchange
 - C. sources of revenue
 - D. types of taxes.
27. Which country borders Kenya to the North West?
- A. Ethiopia
 - B. Uganda
 - C. South Sudan
 - D. Tanzania
28. Which one of the following is NOT an element of weather?
- A. Temperature
 - B. Wind
 - C. Rain gauge
 - D. Sunshine
29. The following are characteristics of a certain climatic region in Kenya.
- i. ***Has low temperatures***
 - ii. ***It is cool and wet***
 - iii. ***It receives rainfall of between 1200mm-2000mm annually.***
 - iv. ***It covers parts of Rift valley.***
- The above climate is likely to be:-
- A. Desert climate
 - B. Equatorial climate
 - C. Tropical climate
 - D. Mountain climate.
30. Which one is NOT a historic built environment in Kenya?
- A. Museums
 - B. Cultural centres

- C. Tall buildings
- D. Monuments

31. The largest Lake in Kenya is:-

- A. Lake Turkana
- B. Lake Victoria
- C. Lake Elementaita
- D. Lake Naivasha

32. A family is a group of people related by the following except:-

- A. Fore father
- B. Blood
- C. Adoption
- D. Marriage

33. Which one of the following minerals is correctly matched with the method of mining?

- A. Gold - Dredging.
- B. Copper - Deep shaft.
- C. Limestone - Open cast.
- D. Soda ash - Drilling. 30.

34. Grade 4 learners were asked by their social studies teacher to give the main reason why they started an entrepreneurship project in their school, who among them gave the correct answer?

- A. Amina- To make use of locally available resources.
- B. Peter - To help the school in buying land.
- C. Margaret - To help them raise income.
- D. William - To help them create employment in school

35. The headteacher of Kabarak Primary School invited Mr. Kigen one of the officers from East African Community to talk about challenges facing the organization. Which one of the following was not mentioned as a challenge?

- A. Poor roads.
- B. Mistrust among members.
- C. Use of a common currency.
- D. Natural calamities.

36. Below are examples of rights and freedoms of Kenya citizens.

- i. Freedom of Movement.
- ii. Right to health care.
- iii. Right to fair pay.
- iv. Right to privacy
- v. freedom of speech.

The Which one of these rights and freedoms are grouped as social?

- A. (ii) and (iv)
- B. (i) and (v)
- C. (iii) and (iv)
- D. (i) and (ii)

37. Which means of transport is suitable for transporting horticultural crops to European market?

- A. Pipeline
- B. Water
- C. Road
- D. Air

38. Which one was the title of the Maasai leader?

- A. Nabongo
- B. Kivoi
- C. Oloibon
- D. Moran

39. Three of the following communities belong to the Western Bantus except:-

- A. Abaluyia
- B. Abakuria
- C. Abagusii
- D. Abasuba

40. The mangrove vegetation in Kenya is found:-

- A. in the highlands
- B. along the coastal regions
- C. in swampy areas
- D. along the rivers

CHRISTIAN RELIGIOUS ACTIVITIES

41. John the Baptist's preaching was about:-
A. The day of passover
B. Repentance and forgiveness
C. Revenge bad for worse
D. Going to the wilderness
42. Which book of the Bible tells christians that God has good plans for their future?
A. Jeremiah
B. Genesis
C. Luke
D. Mathew
43. King Solomon used _____ to solve difficult cases.
A. talents
B. abilities
C. knowledge
D. wisdom
44. How did Adam and Eve disobey God? By:-
A. Selling the fruit of knowledge.
B. Cultivating the land.
C. Eating the fruit in the middle tree,
D. Running away form the garden of Eden.
45. Human beings are different from the rest of God's creation because they:-
A. Walk like God
B. Pray to God
C. Talk like God
D. Were created in God's image.
46. The book of Exodus was written by:-
A. David
B. Moses
C. Paul
D. Solomon
47. Who among the following visited Jesus at night?
A. Lazarus
B. Thomas
C. Justus
D. Nicodemus
48. Which one is NOT a fruit of the Holy spirit?
A. Kindness
B. Self control
C. Faith
D. Gentleness
49. Why is it important to show respect to the elderly?

- A. grow in adulthood
 - B. get money
 - C. be cursed
 - D. be rewarded by God.
50. All our prayers are answered by _____
- A. Our teachers
 - B. Our parents
 - C. Our elders
 - D. God