

KPSEA SUPER PREDICTION



ALL SUBJECTS



A Series of Assessment Questions Prepared by Top KNEC Examiners Nairobi HQ for Academic year 2024.

FOR MORE MARKING SCHEMES:

Contact

Mr Machuki

0724333200/0795491185/0768321553

Email us on kenyaeducators@gmail.com

Or

Visit our website:

www.kenyaeducators.co.ke

**KENYA EDUCATORS
CONSULTANCY**



KPSEA 2024 SUPER PREDICTION

{KENYA PRIMARY SCHOOL EDUCATION ASSESSMENT}

ENGLISH

Time: 1 Hours 40 Minutes

READ THESE INSTRUCTIONS CAREFULLY.

1. You have been given this question booklet and a separate answer sheet. The question bookier contains 30 questions.
2. Do any necessary rough work in this booklet.
3. When you have chosen your answer, mark it on the **ANSWER SHET**, not in the question paper.

HOW TO USE THE ANSWER SHEET.

4. Use an ordinary pencil only.
5. Make sure that you have written on the answer sheet.

YOUR INDEX NUMBER

YOUR NAME

NAME OF YOUR SCHOOL

6. By drawing a **dark line** inside the correct numbered boxes mark your full index number (i.e. school code Number and the three -figure candidate's Number) in the grid near the top of the answer sheet.
7. Do not make any marks outside the boxes.
8. Keep your answer sheet as clean as possible and Do not fold it."
9. For each question 1-30 four answers are given. The answers are lettered A, B, C, D. In each case Only One of the four answers is correct. Chose the correct answer.
10. On the answer sheet show the correct answer by drawing a dark line inside the box in which the letter you have chosen is written.
11. Your dark line Must be within the box. Make your line as dark as possible.
12. For each question **Only One box** is to be marked in each set of four boxes.

Candidates should check the question papers to ensure that all questions are printed.

Read the following conversation and then answer questions 1 to 5

Shopkeeper: Yes customer. How can I help you?

Customer: (Scratching his head) Actually, I came to ask if you could lend me a packet of maize flour and cooking oil.

Shop keeper: Are you aware that this is the fourth time you are coming to borrow something from this shop and yet you never paid for the first three items you borrowed?

Customer; yes, I am aware. Just have mercy on me. I do not have anywhere to get money and my children are hungry.

Shop keeper: Are you mistaken or the alcohol that you took somehow got into your brain? Now listen and listen carefully. I do not entertain such nonsense in my work.

Customer: (angry) Who gave you the power to criticise me? I am better off than you. You think you are so rich that there is no day you will never go on your knees begging and yet all your sons are common thieves.

1. According to this dialogue, the customer wanted to get some items on_____
 - A. credit
 - B. cash
 - C. loan
 - D. hire purchase
2. The opposite of the word lend as used in the conversation could be
 - A. buy
 - B. borrow
 - C. sell
 - D. grant
3. According to the dialogue, the customer had visited the shop _____ times before.
 - A. two
 - B. three
 - C. four
 - D. fourth
4. The word aware could mean all the following except
 - A. conscious
 - B. sensitive
 - C. alert
 - D. clueless.
5. According to the conversation, the shop keeper can be said to be _____
 - A. compassionate
 - B. sympathetic
 - C. arrogant
 - D. friendly

Read the passage below and answer questions 6 to 9

In case of any accident or injury, it is very important to give help to the injured person

before any medical treatment is given to the patient. The first help given to the patient is called First Aid. The right type of First Aid given to the patient sometimes saves lives. So everyone of us should know what quick actions to be taken in different types of accidents. I'll discuss bleeding.

As little bleeding is not dangerous, **apply** any antiseptic and then tie with a clean piece of cloth if **necessary**. If the bleeding is continuous, we must stop it by placing a clean pad or cotton firmly over the wound until the bleeding stops or until the patient sees a doctor.

6. In case of any accident, what would be the first thing to do?
 - A. Give medical treatment
 - B. Give help to the injured person
 - C. Call others
 - D. Rush the patient to hospital.
7. What is the meaning of the word 'necessary' underlined in the story?
 - A. Medical help.
 - B. Wanted
 - C. Not wanted
 - D. Not available.
8. Which word can be used instead of the word 'apply' as used in the passage?
 - A. Put
 - B. Place
 - C. Placed
 - D. Keep
9. Which would be the best title for the passage?
 - A. First Aid
 - B. First Aid and Bleeding
 - C. Bleeding
 - D. First Aid in bleeding.

Read the passage below and answer questions 10 to 12

A long time ago, there was a man and his wife. They had a girl. The girl fell sick many times. She then died and was thrown away so as to rot and be forgotten.

Suddenly, a dove appeared by her side. The dove revived her to life again. It took her to a cave where she lived. After a short while, the girl said she wanted to be with her mother. The dove told her the need for them to stay in the caves, she insisted and the dove let her go. After going home, she felt sick again. She died and her parents threw her away. The dove revived her to life again.

The girl slipped into her home and the dove followed her, took the magic **ornament** which it used to revive the girl and she turned into bones.

While the parents were still wondering what to do with the bones, the dove revived the girl and they went far away to stay as friends forever.

10. According to the passage, how many times did the girl die?

- A. Two
 - B. Four
 - C. Three
 - D. One
11. **Ornament** as used in the passage means?
- A. Decorations
 - B. Rain
 - C. Bones
 - D. Rings
12. From the passage we can conclude that the dove was a friend in _____ to the girl
- A. deed
 - B. need
 - C. true
 - D. action

Read the passage below and answer questions 13 to 15

It was a clear, still night and the moon shone brightly through the water that Tom could not sleep. Suddenly, he saw a beautiful sight. A bright red light moved along the river-side and threw down into the water a long flame.

Tom, a **curious** little rogue, had to go and see what it was; so he swam to the shore and met the light as it stopped over a shallow edge of a low rock.

13. Tom could not sleep because of the ___
- A. clear night
 - B. silent night
 - C. still night
 - D. bright moonlight
14. What did Tom see all of the sudden? A
- A. beautiful riverside
 - B. bright red light
 - C. long flame
 - D. beautiful site
15. Tom was curious, that means Tom was ___
- A. brave
 - B. coward
 - C. dangerous
 - D. eager to know.

Read the passage below. It contains blank spaces numbered 16 to 20. For each blank space , select the best alternative from the choices given

Snakes 16 poisonous 17. 18 thier tongue are not poisonous. The snake uses 19 tongue to 20 what is in front of it.

16. A. had B. has C. have D. are
17. A. fangs B. teeth C. canines D. saliva
18. A. But B. And C. When D. As
19. A. its B. it's C. its' D. thier
20. A. feel B. fill C. suck D. see

For questions 21 to 23, choose the correct form of the verb to fill in the gaps

21. She has ___ all her money
 - A. loose
 - B. losed
 - C. lose
 - D. lost
22. They _____ him stealing books
 - A. caught
 - B. catched
 - C. catch
 - D. caughted
23. I was _____ by his remarks
 - A. hurted
 - B. hurt
 - C. hut
 - D. heart

For questions 24 to 26, select the correct question tag.

24. They like walking home, _____?
 - A. do they
 - B. don't they
 - C. will they
 - D. shouldn't they
25. Let us observe the covid-19 protocols, _____?
 - A. shall we
 - B. is it
 - C. will we
 - D. let we

26. We ate fish for dinner, _____?
- A. weren't we
 - B. were we
 - C. didn't we
 - D. did we

For questions 27 to 29, select the correct form of adjective.

27. My sister wore a _____ dress
- A. red, cotton, pretty,
 - B. pretty, cotton, red
 - C. cotton, red, pretty
 - D. pretty, red, cotton
28. Yesterday I saw _____ birds
- A. tiny, three, beautiful
 - B. three, beautiful, tiny
 - C. tiny, beautiful, three
 - D. three, tiny, beautiful
29. Her birthday present was a _____ shawl
- A. red, small, pretty, silk
 - B. pretty, small, red, silk
 - C. small, pretty, silk, red
 - D. red, silk, small, pretty

For question 30, choose the correct alternative to fill in the gap

30. This is the most tiresome journey I have _____ had
- A. ever
 - B. whatever
 - C. never
 - D. whenever



KPSEA 2024 SUPER PREDICTION
{KENYA PRIMARY SCHOOL EDUCATION ASSESSMENT}

INTEGRATED SCIENCE
{AGRICULTURE & NUTRITION AND SCIENCE & TECHNOLOGY}

Time: 1 Hours 40 Minutes

READ THESE INSTRUCTIONS CAREFULLY.

1. You have been given this question booklet and a separate answer sheet. The question bookier contains 50 questions.
2. Do any necessary rough work in this booklet.
3. When you have chosen your answer, mark it on the **ANSWER SHET**, not in the question paper.

HOW TO USE THE ANSWER SHEET.

4. Use an ordinary pencil only.
5. Make sure that you have written on the answer sheet.

YOUR INDEX NUMBER

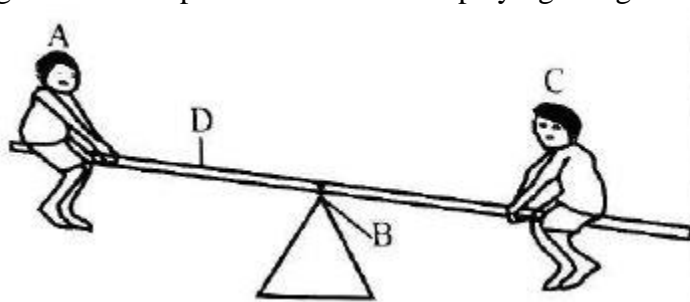
YOUR NAME

NAME OF YOUR SCHOOL

6. By drawing a **dark line** inside the correct numbered boxes mark your full index number (i.e. school code Number and the three -figure candidate's Number) in the grid near the top of the answer sheet.
7. Do not make any marks outside the boxes.
8. Keep your answer sheet as clean as possible and Do not fold it."
9. For each question 1-50 four answers are given. The answers are lettered A, B, C, D. In each case Only One of the four answers is correct. Chose the correct answer.
10. On the answer sheet show the correct answer by drawing a dark line inside the box in which the letter you have chosen is written.
11. Your dark line Must be within the box. Make your line as dark as possible.
12. For each question **Only One box** is to be marked in each set of four boxes.

Candidates should check the question papers to ensure that all questions are printed.

1. Two grade six boy visisted a cliff near their school and started shouting. After sometime, they were able to hear their sound back. What were the two boys most likely investigating?
 - A. How far the sound travels .
 - B. Reflection of sound.
 - C. Direction of sound.
 - D. How deep sound goes from a cliff.
2. The diagram below represents two learners playing using a see saw.



Among the following, which part represents the fulcrum?

- A. b
 - B. D
 - C. A
 - D. C
3. During a class discussion, grade five leraner were asked to group vertebrates correctly into their groups. Among the following, which one of the vertebrates is the **odd** one out?
 - A. Shark
 - B. Spiny ant-eater
 - C. Whale
 - D. Dolphin
 4. The following are signs and symptoms of a certain type of disease as listed by a grade five learner.
 - i. Prolonged coughs
 - ii. Chest pain
 - iii. Loss of appetite
 - iv. Night sweatsWhich one of the following diseases is described above?
 - A. Influenza
 - B. Pneumonia
 - C. Asthma
 - D. Tuberculosis
 5. The human heart has different parts with different functions. Which among the part wll

receive the oxygenated blood?

- A. Right ventricle
- B. Right uricle
- C. Left auricle
- D. Left ventricle

6. During a Science and Technology lesson, grade six learner were discussing about the blood components. Whicha among the following blood is necessary in transporting salts around the body?

- A. Plasma
- B. Platelets
- C. White blood cells
- D. Red blood cells

7. Kaimenyi was involved in a road accident and was rushed to a nearby hospital. On arrival, the doctor noticed he needed more blood. Who among the following was able to donate blood to him if he was in blood group B.

- A. Kamau - Blood A
- B. Vincent - Blood group AB
- C. Fiona - Broup A and B
- D. Kerubo - Blood group O

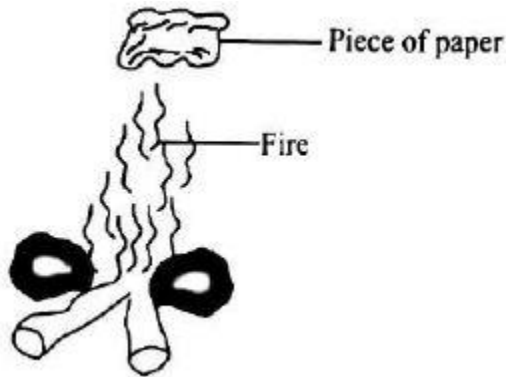
8. A grade six Science and Technology teacher displayed flash cards showing the safety precautions to be observed when handling computing devices. Which of the flashcards is not correct?

- A. Cover the desktop computers after use.
- B. Sit too close to computer to avoid accidents.
- C. Sit in a correct posture while using computers.
- D. Do not eat or drink while using computers.

9. Three of the following are importance of the invertebrates in our environments. Which among the following is **not** a function?

- A. Help in pollination.
 - B. Aerate soil making it suitable for farming.
 - C. Make food for birds and other animals.
 - D. Eat pests that destroy crops.
10. The following are parts of the female reproductive system. Which among the parts will provide room for the development of the embryo?
- A. Uterus
 - B. Cervix
 - C. Vagina
 - D. Oviduct
11. Grade six Science and Technology teacher asked learners to go and find out from their communities ways of conserving water. Which among the following is **not** a correct way of conserving water in the community?
- A. Building dams to trap rainwater.
 - B. Turning off water taps after use.
 - C. Re-using.
 - D. Sprinkling clean water on dusty compound.
12. Three of the following are uses of acids in our daily lives. Which one of the following is **not** use of an acid?
- A. Killing germs in food in our stomach.
 - B. Used to manufacture car batteries.
 - C. Used to manufacture bleaches.
 - D. Used in making fertilizers.
13. Grade six learners were discussing about different functions of different parts of a plant. Which among the following is **not** a function of the stem in green plants?
- A. Manufacture food.
 - B. Stores food.
 - C. Provides support for the plant.
 - D. Transports water and mineral salts to other parts.

14. The diagram below demonstrates a certain method of heat transfer.



Which method of heat transfer was demonstrated above?

- A. Radiation
- B. Convection
- C. Reflection
- D. Conduction

15. Below a diagram representing a phase of the moon.



Which among the following is the phase represented?

- A. Quarter moon
- B. Crescent
- C. New moon
- D. Gibbous

16. Three of the following are routine practices in rearing of small domestic animals. Which among them is **not**?

- A. Feeding
- B. Shaving
- C. Cleaning tools and equipment.
- D. Maintaining appropriate number.

17. Different creeping crops takes different periods of time to mature. After how long will thorn melon mature and be ready for harvesting?

- A. 75 days
- B. 3 to 4 weeks

- C. 4 to 6 weeks
 - D. 3 to 4 months
18. During a dry season, grade five learners visited a farmer near their school to learn about different types of crops. The learners were able to notice dry leaves were spread around the crops. Which among the following is the main reason for the practice?
- A. Conserving water.
 - B. Supplying more nutrients to the
 - C. Making soil to be more fertile. crops.
 - D. Improving air circulation in the soil.
19. Mr. Nzioka is a well known farmer in his community. He grows different creeping crops in the farm. Which among the following is not a creeping crop in Nzioka's farm?
- A. Watermelon
 - B. Pumpkin
 - C. Strawberries
 - D. Kiwi
20. Three of the following are practices carried out in caring for the creeping crop garden. Which among them is **not**?
- A. Weeding
 - B. Thinning
 - C. Applying manure
 - D. Training creeping crops
21. A farmer used a thorn fence to fence around his maize farm. Which among the following animals would the maize farm be protected against
- A. Monkeys
 - B. Moles
 - C. Birds
 - D. Gazelles
22. Musyoka is a very talented athlete with a good character. Which one of the following is not an importance of having a good character for a sports person?
- A. It boosts the self-confidence of the sports person.
 - B. It allows the sports person have a negative attitude.
 - C. It allows achieving of goal
 - D. It allows teamwork amongst sports people.
23. Grade five learners were asked to state the types of vegetables that can best be planted using innovative gardening. Which among the following **cannot** be grown in a vertical innovative gardening?
- A. Spinach
 - B. Coriander
 - C. Maize

- D. Kales
24. Which among the following can **best** be used in controlling sheet erosion?
- A. Building gabions
 - B. Growing cover crops
 - C. Contour ploughing
 - D. Constructing terraces down the slope.
25. Mr. Okumu practices organic gardening in his farm. Which among the following is **not** a practice for organic gardening for peas?
- A. Use of organic manure instead of fertilizers.
 - B. Use of seeds free from pest and diseases.
 - C. Handpicking the pests once spotted.
 - D. Use of pesticides to kill pest.
26. Mrembo was told to plan for their dinner one day. Which one of the following factors was **not** important to consider?
- A. Food available.
 - B. Variety in the meal.
 - C. The time of eating.
 - D. Number of people.
27. Mr. Ngari was teaching dry fat frying method of cooking. He asked his learners to mention foods that can be cooking using dry fat frying. They gave their answers as follows:
- Kylen - Fish
 - Angeline - Arrowroots
 - Chloe - Chicken
 - Natalie - Bread
- Who among them was **wrong**?
- A. Angeline
 - B. Kylen
 - C. Natalie
 - D. Chloe
28. Madam Mugambi asked 4 learners to state the food they had taken during supper the previous night. They stated as follows;
- Atieno: Ugali, eggs, kales.*
- Levis: Chapati, green grams, meat.*
- Judy: Creen bananas, potatoes, avocado.*
- Juma: Spaghetti, rice, chicken.*
- Who among the following learners took a balanced diet?
- A. Juma
 - B. Levis
 - C. Judy
 - D. Atieno
29. Non communicable diseases can be caused by all the following **except**?

- A. excess intake of sugar
 - B. using alcohol
 - C. regular exercises
 - D. eating junk food
30. Makini loves using different kinds of cosmetics on her face. The following are dangers that she can face **except**?
- A. eye irritation
 - B. soothing the skin
 - C. itchiness of the skin
 - D. sneezing
31. Janet prepared the shopping list shown below.

	Item	Quantity	Amount
1	Maize flour	2 packets	500.00
2	Tissue paper	10 rolls	450.00
3	Tomatoes	1 kilogram	300.00
4	Bread	1 loaf	80.00
5	Milk	2 packets	100.00
6	Pens	2	100.00

What did Janet forget to do?

- A. Adding the total amount.
 - B. Indicate the shop
 - C. Adding the total amount.
 - D. Spending more money.
32. Karau's lower front part of his neck seems to be swelling. His voice is hoarse and has difficulties swallowing food. Which nutritional deficiency disorder does Karau suffer from?
- A. Anaemia
 - B. Kwashiorkor
 - C. Constipation
 - D. Goitre
33. Njoroge had a gaping seam on his school short. Which of the following stitches would Njoroge use to repair his short.
- A. Hemming
 - B. Chain stitch
 - C. Backstitches
 - D. Satin stitches
34. One of the following is a reason why we preserve meat. Which one?

- A. To remove fat
- B. To make it more
- C. To make it tastier
- D. To make it last longer

35. Mr Lee listed the following signs and symptoms of a certain nutritional deficiency disease.

- i. Brownish thin hair.
- ii. Swollen body parts like arms, feet and face.
- iii. Sores at the corners of the mouth.
- iv. Protruding belly.

Which disease was he talking about?

- A. Kwashiorkor
- B. Obesity
- C. Rickets
- D. Marasmus.

36. Which one of the following does not happen on the command 'on your marks' during bunch start?

- A. Place the legs with toes approximately in line with the heel of the front foot.
- B. Place both feet behind the starting line.
- C. Raise the hips above the shoulders.
- D. Keep the head in line with the body, eyes focused ahead down on the lane.

37. In which method of finishing a race does the athlete bend, push both arms backwards and touch the finishing line with the chest?

- A. Drop finish
- B. Shoulder shrug
- C. Run through finish
- D. Bunch start

38. The method of clearing the bar in high jump that involves the legs making a criss-crossing action over the crossbar during flight is called

- A. Western Roll Technique
- B. Fosbury Flop
- C. Straddle Technique
- D. The scissor technique

39. In which method of finishing a race does the athlete bend, push both arms backwards and touch the finishing line with the chest?
- A. Drop finish
 - B. Shoulder shrug
 - C. Run through finish
 - D. Bunch start
40. Which of the following is the **correct** sequence for the swing kick technique in ropework?
- A. Swing the leg forward then sideways.
 - B. Swing the leg backward and then sideways.
 - C. Swing the leg to the left and then to the right.
 - D. Swing the leg backward then swing forward.
41. Who is the only player on the field of play during a soccer game, that can touch the ball with hands?
- A. Midfielder
 - B. Striker
 - C. Defender
 - D. Goalkeeper
42. Which one of the following is **not** a fault in volleyball game?
- A. Serving the ball over the net.
 - B. Stepping on or over the line on a serve.
 - C. Hitting the ball twice in a row.
 - D. Reaching under the net and crossing the line.
43. Tackling in handball involves
- A. throwing the ball in the goal.
 - B. catching the ball using a 'w' formation.
 - C. stopping an attacking player with the hands and chest.
 - D. rolling the ball on the ground continuously.
44. When playing netball, which positions are not allowed in the **D**?
- A. Goal defence
 - B. Goal shooter
 - C. Centre
 - D. Goal attack
45. How many bases are there on the softball field, excluding home plate?
- A. 3
 - B. 4
 - C. 2
 - D. 5
46. Which one of the following is a defence skill in a game of kabadd?

- A. Hand touch
 - B. Toe-touch
 - C. Foot touch
 - D. Ankle hold
47. Which of the following is the correct body position during the inverted breast stroke?
- A. The body should lie horizontally on the back with the hips slightly above the water.
 - B. The body should lie horizontally with the chest, head and face in the water.
 - C. The body should lie horizontally on the back with the hips wholly above the water.
 - D. The body should lie horizontally on the back with the legs bent.
48. A throw that starts play in a game of frisbee or after a score is called
- A. a huck
 - B. a dump
 - C. a slice
 - D. a pull
49. During outdoor activities, conflicts can be avoided in three of the following was **except** one. Which one is it?
- A. Job sharing.
 - B. Poor communication.
 - C. Making use of volunteers.
 - D. Giving support and encouragement to group members.
50. Which of the following is an importance of cool down activities?
- A. Muscles become warm.
 - B. The blood begins to warm up.
 - C. Helps to prevent injuries.
 - D. Your muscles relax without being sore.



KPSEA 2024 SUPER PREDICTION

{KENYA PRIMARY SCHOOL EDUCATION ASSESSMENT}

KISWAHILI

Muda: Saa 1

SOMA KWA MAKINI MAAGIZO YAFUATAYO.

1. Umepewa kijitabu hiki cha maswali na karatasi ya kujibia. Kijitabu hiki kina maswali 30.
2. Ikiwa utataka kuandika chochote si jibu andika katika kijitabu hiki.
3. Ukisha chaguajibu lako ionyeshe katika KARATASIYAMAJIBU na wala sio katika kijitabu hiki cha maswali.

JINSI YA KUTTIMIÁ KARATASI YA MAJIBU.

4. Tumia penseli ya kawaida. 5. Hakikisha ya kwamba yafuatayo yameandikwa katika karatsi ya majibu.

NAMBARIYAKO YA MTIHANI

JINA LAKO

JINA LA SHULE SHULE YAKO

6. Kwa kuchora kistari katika visanduku vyenye namba zinazokuhusu, onyesha namba ako kamili ya mtihani yaani namba ya shule, na zile namba tatu za mtahiniwa) katika sehemu iliyotengwamwanzo wa karatasi ya majibu.
7. Usitie alama zozote nje ya visanduku,,
8. Iweke safi karatasi yako ya maibu.
9. Kwakila swali 1-30 umepewamajibu manne. Majibu'ha o yameonyeshwakwä herufi A, B,D naD. Ni jibu **MOJA** tu kati ya hayo manne ambalo ni sahihi. Chagua jibu hilisi
10. Kwenye karatasi ya majibu,jibu sahihi lionyeshwe kwakuchora kistari katika kisanduku chenye herufi uliyochagua kuwa ndilojibu.
11. Chora kistari chako vizuri. Kistari chako kiwe cheusi na kisijitokeze nje ya kisanduku.
12. Kwakila swali, chora kistari katika kisanduku kimoja tu kati ya visanduku ulivyopewa.

Candidates should check the question papers to ensure that all questions are printed.

Soma mazungumzo vafuatayo kisha ujibu maswali 1 hadi 5.

Rozina: Shikamoo Lawi?

Lawi: Marahaba Rozina. U hali gani?

Rozina: Njema. Nashuru "Mola" kwa kila hali ya leo. Habari za utokako?

Lawi: Nzuri. Lakini nimechoka sana. Nimekuwa shambani kutwa nzima niking'oa magugu.

Rozina: Pole sana kwa uchovu. Mwakani utalia kivulini.

Lawi: Umegonga ndipo. Uzohali ni nyumba ya njaa. Bidii zangu zitanifaidi sana.

Rozina: Hakika mimi nilimaliza kazi zote za shambani jana. Leo nikaamua kumtembelea bibi. Si unajua amekula chumvinyingi.

Lawi: Naam, pia kazi hiyo ni nzuri.

Rozina: Nimemsaidia kupiga deki na kuosha nguo zake. Amefurahi sana.

Lawi: Umefanya vyema. Heko!

Rozina: Tutaonana kesho kikaoni.

Lawi: Inshallah! Asante Rozina.

1. Kati ya Rozina na Lawi nani ako na umri nyingi?
 - A. Rozina
 - B. Lawi
 - C. Hakuna
 - D. Wote
2. Nani alisaidiwa kulingana na mazungumzo haya?
 - A. Ajuja
 - B. Mke
 - C. Nyanya
 - D. Shaibo
3. Kulingana na mazungumzo haya ni kweli kusema kuwa:--
 - A. Lawi alimsaidia bibi
 - B. Rozina alipenda kazi tofauti.
 - C. Lawi na Rozina ni wakulima
 - D. Lawi aling'oa kwekwe shambani
4. Ni neno gani la adabu alitumia Rozina kwa Lawi?
 - A. pole
 - B. samahani
 - C. karibu
 - D. asante
5. Neno "Mola" imetumika kwa mazungumzo. Maana yake ni:-
 - A. Mazao
 - B. Bidii
 - C. Mungu

D. Shamba

Soma kifungu kifuatacho kisha ujibu maswali 6 hadi 15.

Hapo jadi na jadudi paliishi mhunzi alikuwa na taaluma ya ufinyazi. Aliitwa Zuma. Alitegeneza sime, visu na hamadi kwa mhanga mwarara. Zilikuwa zana za hali ya juu. Aidha, vilimezewa mate na wengi. Kutokana na kipaji chake alizidi kutokuwa na jasho jekejeke kutokana na zaburi alizopokea kutoka kwa wateja wake. Kwa udi na uvumba alijifunga kibwekibwe kutimiza ahadi zake. Mchanga aliotumia Zuma ulikuwa wa kipekee. Ulipatikana tu katika nchi ya mbali.

Siku moja aliumaliza mchanga wake. Alimuaga mkewe aliyekuwa na jukumu la kumtunza mwana mtarajiwa. Nyathira hakutaka kuachwa peke yake. Zuma alimuuliza ninaye kumtunza akiondoka.

Ingawa mamaye Zuma alikuwa ajuzi alikuwa mhariri na mwenye nguvu. Alimsaidia mkazamwana wake kwa kazi za nyumba kisha akawapeleka kondoo malishoni. Nyathira alipika na kuosha vyombo pasi kufanya kazi ngumu. Aliacha kuchota maji, kutafuta kuni na kupalilia mimea.

Jioni moja Bi. kizee yule hakurudi kutoka malishoni. Mwangaza ulipoondoka, Nyathira hakujua la kufanya kwani hakuwa na kurunzi nao mwangaza ulikuwa adimu. Alishikwa ma woga na akakata tamaa. Alijiloza katika kitanda kungoja kuche akamtafute.

6. Zuma alifanya kazi gani? Kazi ya:-
 - A. kufinyanga
 - B. uashi
 - C. kuwinda
 - D. usonaha
7. Vifaa alivyotengeneza ni:-
 - A. Ala za vita
 - B. Vifaa vya upishi
 - C. Vifaa vya usafiri
 - D. Vifaa vya muziki
8. Kutokana na habari hii ni kweli kusema:-
 - A. Zuma alikuwa na wateja wengi.
 - B. Zuma alikuwa kapera
 - C. Zuma alikuwa na watoto wawili
 - D. Zuma alikuwa mzembe.
9. Si kweli kusema kwamba:-
 - A. Zuma alitengeneza vitu vizuri.
 - B. Mamake Zuma alimsaidia mkazamwanawe.
 - C. Zuma alitumia mchanga wowote kufinyanga.

- D. Mamake Zuma alikuwa na nguvu.
10. Kifungu "vilimezewa mate na wengi" ni kumaanisha kwamba:-
- A. watu walivitemea mate.
 - B. watu walitokwa na mate.
 - C. walividharau
 - D. watu walivitamani
11. Mama Zuma alifanya kazi gani?
- A. Kuchunga kondoo
 - B. Kuteka maji
 - C. Kuvunja kuni
 - D. Kufanya biashara
12. Mkewe Zuma aliitwa nani?
- A. Mumbi
 - B. Mfinyazi
 - C. Nyathira
 - D. Ajuza
13. Nyathira angeenda kumtafuta mama yake lini?
- A. jioni
 - B. usiku
 - C. asubuhi
 - D. hatujui
14. Neno "taaluma" linamaanisha nini?
- A. ujuzi
 - B. kutojua
 - C. daktari
 - D. kasoro
15. Mke wa Zuma aliachiwa kazi zifuatazo isipokuwa:-
- A. kupalilia
 - B. kuchota maji
 - C. kutafuta kuni
 - D. kufua nguo

Kutoka swali 16 hadi 20, jaza pengo na maneno chini.

Karai ___16___ hununuliwa dukakuu na dobi. Huwekwa maji ___17___ ya ___18___ nguo chafu. Dobi hutumia sabuni ___19___ katika duka la raja raja. Baada ya nguo kuwa safi, huanikwa na baadaye kupigwa ___20___.

	A	B	C	D
16.	ile	lile	yale	kile
17.	mingi	chache	mengi	ndogo
18.	kuvulia	kuvua	kufua	kufulia
19.	kinachonunuliwa	inunuliwayo	yanayonunuliwa	inayonunua
20.	bao	jeki	kitutu	pasi

Kutoka nambari 21 hadi 30, jibu kulingana na maagizo.

21. Tulienda kanisani kuimba kwaya. Neno kanisani ni:-

- A. Nomino
- B. Kivumishi
- C. Kiwakilishi
- D. Kielezi

22. Gari _____ liliharibika njiani.

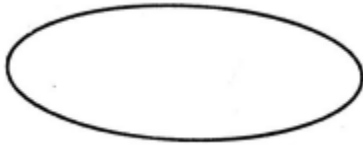
- A. nzuri
- B. langu
- C. moja
- D. lile

23. **Wingi wa sentensi hii ni:-**

Msichana yule ni mgonjwa.

- A. Wasichana wale ni wagonjwa.
- B. Wasichana yule ni mgonjwa.
- C. Wasichana hao ni wagonjwa.
- D. Wasichana hawa ni wagonjwa.

24. Umbo hili huitwa?



- A. Duara
- B. Mraba
- C. Mche
- D. Duara dufu

25. Neno "ufahamu" lina irabu ngapi?
A. mbili
B. tatu
C. nne
D. saba
26. Neno "ua" liko katika ngeli gani?
A. I-ZI
B. I-I
C. LI-YA
D. A-WA
27. Jibu wa waambaje ni nini?
A. vizuri
B. vyema
C. vibaya
D. sina la kuamba
28. Mtoto wa mjomba au shangazi ni:-
A. kuzo
B. mkoi
C. shemeji
D. wifi
29. Tumia -enyewe kwa ufasaha.
Shati _____ ni safi.
A. lenyewe
B. yenyewe
C. enyewe
D. mwenyewe
30. Wageni walikula wali _____ nyama
A. na
B. pia
C. kwa
D. tena



KPSEA 2024 SUPER PREDICTION
{KENYA PRIMARY SCHOOL EDUCATION ASSESSMENT}

KISWAHILI INSHA

Muda: Dakika 40

INSHA

Andika insha ya kuisimua kuhusu:

UMUHIMU WA MAJI

Blank lined area for writing or marking.



KPSEA 2024 SUPER PREDICTION

{KENYA PRIMARY SCHOOL EDUCATION ASSESSMENT}

MATHEMATICS

Time: 1 Hours 40 Minutes

READ THESE INSTRUCTIONS CAREFULLY.

1. You have been given this question booklet and a separate answer sheet. The question bookier contains 30 questions.
2. Do any necessary rough work in this booklet.
3. When you have chosen your answer, mark it on the **ANSWER SHET**, not in the question paper.

HOW TO USE THE ANSWER SHEET.

4. Use an ordinary pencil only.
5. Make sure that you have written on the answer sheet.

YOUR INDEX NUMBER

YOUR NAME

NAME OF YOUR SCHOOL

6. By drawing a **dark line** inside the correct numbered boxes mark your full index number (i.e. school code Number and the three -figure candidate's Number) in the grid near the top of the answer sheet.
7. Do not make any marks outside the boxes.
8. Keep your answer sheet as clean as possible and Do not fold it."
9. For each question 1-30 four answers are given. The answers are lettered A, B, C, D. In each case Only One of the four answers is correct. Chose the correct answer.
10. On the answer sheet show the correct answer by drawing a dark line inside the box in which the letter you have chosen is written.
11. Your dark line Must be within the box. Make your line as dark as possible.
12. For each question **Only One box** is to be marked in each set of four boxes.

Candidates should check the question papers to ensure that all questions are printed.

1. What is the place value of digit 8 in 815276
 - A. Thousands
 - B. Hundred thousands
 - C. Tens
 - D. Ten thousands
2. Charles sold 476391 bags of maize to a miler. Write the number of bags sold in words.
 - A. Four hundred and seventy six thousand three hundred and ninety one
 - B. Forty seven thousand three hundred and ninety one
 - C. Four hundred and seventy six thousand and three ninety one.
 - D. Four thousand seven hundred and ninety one
3. Subtract 67231 from 800284 by rounding off each to the nearest thousand.
 - A. 73.053
 - B. 733053
 - C. 867053
 - D. 733000
4. Work out the quotient of 7658 and 784 by rounding off each to the nearest thousand.
 - A. 7
 - B. 8
 - C. 8,000
 - D. 1,000
5. Work out
 $9768 \div 20$
 - A. 48 rem 4
 - B. 588 rem 16
 - C. 488 rem 8
 - D. 58
6. Work out the reciprocal of $7\frac{1}{5}$
 - A. $\frac{36}{5}$
 - B. $\frac{5}{36}$
 - C. $\frac{7}{5}$
 - D. $\frac{5}{71}$
7. Work out 46^2
 - A. 2116
 - B. 92
 - C. 416
 - D. 822
8. A fruit vendor bought ten apples at sh 25 each. If he sold each at shs 30, what profit did he make?
 - A. sh 50
 - B. sh 55
 - C. sh 300
 - D. sh 150
9. The cost of a jacket is sh 5600. What is the cost of 27 such jackets?

- A. sh 117600
 - B. sh 267
 - C. sh 151200
 - D. sh 83
10. Work out $\frac{3}{4} - \frac{2}{7}$
- A. $\frac{1}{3}$
 - B. $\frac{13}{28}$
 - C. $\frac{6}{28}$
 - D. $\frac{7}{12}$
11. Fill in the missing factor
- 276 x = 14904
- A. 413504
 - B. 826
 - C. 504
 - D. 54
12. What is the greatest common divisor of 72 and 56?
- A. 16
 - B. 36
 - C. 8
 - D. 42
13. Multiply 40cm 9mm by 7
- A. 20cm 19mm
 - B. 280cm 63mm
 - C. 80cm 9mm
 - D. 286cm 3mm
14. Convert 265mm to centimetres and millimetres.
- A. 26cm 5mm
 - B. 2cm 65mm
 - C. 265cm
 - D. 2650cm
15. One hundred and eight seedlings were to be shared equally among twelve farmers. How many seedlings would each farmer get?
- A. 19
 - B. 1 111
 - C. 1 296
 - D. 9.
16. A carpenter made **32** cupboards, **18** tables and **y** stools. If the total number of furniture was **63**, how many stools were made?
- A. 23
 - B. 13

- C. 50
D. 53
17. Write 19 in roman numerals
A. XVIII
B. IXX
C. XIX
D. XX
18. Convert $\frac{1}{8}$ into a decimal.
A. 0.625
B. 0.5
C. 0.125
D. 0.8
19. Work out $243.76 + 7.009 + 3.5$
A. 250.769
B. 254.269
C. 2549
D. 31.420
20. A trader brought 3 tonnes of sugar from the factory. How many kilograms did the trader buy?
A. 30kg
B. 30000kg
C. 300kg
D. 3000kg
21. Rotich bought a pineapple for sh 180 and later sold it for sh 150. What loss did he make?
A. sh 100
B. sh 230
C. sh 30
D. sh 130
22. Divide 26cm 4mm by 6
A. 4cm 4mm
B. 6cm 6mm
C. 8cm 6mm
D. 10cm 8mm
23. Convert 2247hrs into 12 hours clock system.
A. 12:47pm
B. 10:47p.m
C. 4.47pm
D. 14:47am
24. What is the place value of digit 7 in 12.2173?
A. Tens
B. Thousandths

- C. Thousands
D. Hundreds
25. Convert 3700 millilitres to litres
- A. 3.7 litres
B. 37 litres
C. 370 litres
D. 37000 litres
26. Mariarosa received x beads after their teacher divided **125** beads equally among **5** of them. How many beads did Mariarose get?
- A. 25
B. 35
C. 15
D. 45

27. Work out:

hrs	mins
5	16
x	7

- A. 35hrs 52mins
B. 36hrs 112mins
C. 35hrs 112mins
D. 36hrs 52mins
28. Mwende has a square piece of cloth whose side is **18cm**. What is the area of the piece of cloth?
- A. 36cm^2
B. 360cm^2
C. 324cm^2
D. 334cm^2
29. Work out:
- A. 7 tonnes 900 kg
B. 9 tonnes 700 kg
C. 8 tonnes 800 kg
D. 7 tonnes 700 kg
30. How many faces does a cuboid have?
- A. 9
B. 8
C. 5
D. 6



KPSEA 2024 SUPER PREDICTION **{KENYA PRIMARY SCHOOL EDUCATION ASSESSMENT}**

CREATIVE ARTS, SOCIAL STUDIES & RELIGIOUS EDUCATION

Time: 1 Hours 40 Minutes

READ THESE INSTRUCTIONS CAREFULLY.

1. You have been given this question booklet and a separate answer sheet. The question bookier contains 50 questions.
2. Do any necessary rough work in this booklet.
3. When you have chosen your answer, mark it on the **ANSWER SHET**, not in the question paper.

HOW TO USE THE ANSWER SHEET.

4. Use an ordinary pencil only.
5. Make sure that you have written on the answer sheet.

YOUR INDEX NUMBER

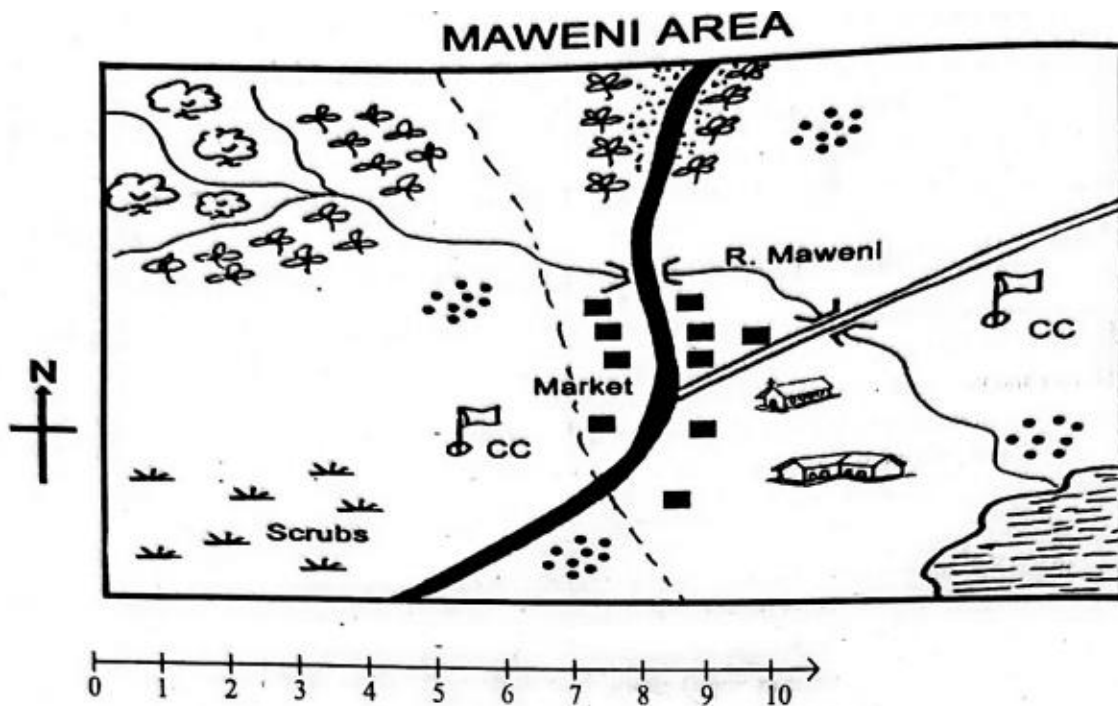
YOUR NAME

NAME OF YOUR SCHOOL

6. By drawing a **dark line** inside the correct numbered boxes mark your full index number (i.e. school code Number and the three -figure candidate's Number) in the grid near the top of the answer sheet.
7. Do not make any marks outside the boxes.
8. Keep your answer sheet as clean as possible and Do not fold it."
9. For each question 1-50 four answers are given. The answers are lettered A, B, C, D. In each case Only One of the four answers is correct. Chose the correct answer.
10. On the answer sheet show the correct answer by drawing a dark line inside the box in which the letter you have chosen is written.
11. Your dark line Must be within the box. Make your line as dark as possible.
12. For each question **Only One box** is to be marked in each set of four boxes.

Candidates should check the question papers to ensure that all questions are printed.

©KNEC 2024 [Contact 0724333200 for Marking Schemes or Order online
at www.kenyaeducators.co.ke]



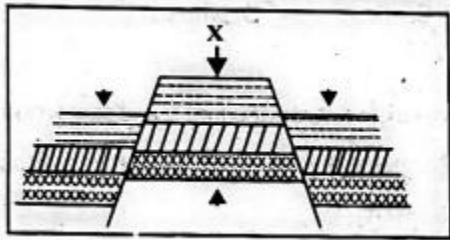
KEY

	Tarmac road		Church
C.C	Chief's Camp		Locational boundary
	Tea		Forest
	Murram road		Settlement
	Coffee		River and Bidge
	Permanent buildings		Lake
	School		

- The land in Maweni area slopes from
 - North to West
 - West to South


- C. North West to South East
D. South East to North.
2. Which type of climate is experienced in the Northern part of Maweni area?
A. Hot and dry.
B. Wet and cool.
C. Cool and wet.
D. Hot and wet.
3. The **main** means of transport in Maweni area is
A. road
B. air
C. water
D. pack animals.
4. The following shows that Maweni area is developed except the presence of
A. farms
B. factories
C. roads!
D. markets
5. Maweni area is **likely** to be headed by a
A. Chief
B. Governor
C. County commissioner
D. Member of County Assembly.
6. Which of the following is an indigenous beef cattle?
A. Zebu
B. Fresian
C. Jersey
D. Ayrshire.
7. Which of the following is a characteristic of large-scale farming?
A. Use of simple tools.
B. Crops are grown for home use.
C. Large tracks of land are cultivated.
D. Use of family labour.
8. Grade 6 learners wanted to practice fishing. Which main inland fishing ground in Kenya can they visit?
A. Lake Turkana
B. Lake Victoria
C. River Tana
9. Which language group in Eastern Africa has the least number of people?
A. Bantu
B. Cushites
C. Semites
D. Nilotes

10. A tourist visited our country and saw writings on a banner at the airport about a citizen. Who is a citizen? A
- A. family member
 - B. person who owns property
 - C. person who runs from his/her country
 - D. person who belongs to a particular country.
11. During a group discussion, Grade 6 pupils listed the following examples of plains. Which answer did they give wrong?
- A. Lotikipi
 - B. Nyambene
 - C. Bilesha
 - D. Kano.
12. Which of the following is **not** an element of weather?
- A. Temperature
 - B. Sunshine
 - C. Cloud cover
 - D. Rain
13. Kibwana school has different leaders. Grade 6 learners asked their teacher to help them identify sections of leadership in the school. Which section of leadership is top in the structure in a school?
- A. Head teacher
 - B. Deputy head teacher
 - C. Board of management
 - D. Parents.
14. The figure below shows a land forming process.



- The force marked X is
- A. compression force
 - B. upthrust force
 - C. tension force
 - D. inertia.
15. Which one of the following is not a block mountain?
- A. Aberdares Mountain
 - B. Mt. Pare
 - C. Mt. Ruwenzori
 - D. Mt. Kenya

16. Which of the following songs is wrongly matched with the purpose it serves?
- A. Patriotic - Praise leaders of a country.
 - B. Popular - Pass a certain message.
 - C. Lullaby - Comfort babies.
 - D. D. Sacred - Please God.
17. Which of the following values **cannot** be learnt from the East African Community Anthem?
- A. Selflessness
 - B. Patriotism
 - C. Tribalism
 - D. Peace.
18. Grade six learners sang the song '**Tushangilie Kenya**' during a National day celebration. The boys sang in bass and tenor while the girls sang in soprano and alto. We can say that this song was sung in
- A. unison
 - B. harmony
 - C. voice parts
 - D. genders.
19. Anita came across the wind instrument below. Identify its name and the community where it is used in folk song performance.



- A. Obokano-Kisii
 - B. Adeudeu-Teso
 - C. Orutu - Luo
 - D. Sukuti-Luhya.
20. When playing a chivoti, we can change the pitch of the tune by
- A. covering and uncovering the holes.
 - B. pressing softly all the holes.
 - C. pressing hard all the holes.
 - D. only covering the holes.
21. Kilumi dancers carried drums to perform in Music Festivals. The performers wore sisal skirts and decorated themselves with necklaces. The presentation was good but its ending did not please the judges. Which feature of a folk song did they fail to apply at the end?
- A. Instrumentation
 - B. Costumes
 - C. Climax
 - D. Participants.

22. Which solfa syllable is shown below?



- A. do
 - B. mi
 - C. re
 - D. ti
23. Sofi wanted to make a drum. Which of the following materials was she likely to use?
- A. Hollow wood, animal skin, string.
 - B. Hollow wood, piece of cloth, strings.
 - C. Hollow wood, animal skin, metal rod.
 - D. Hollow wood, piece of cloth, animal skin.
24. Grade 6 pupils were asked to identify the French rhythm name given to a semibreve. What was their correct response?
- A. Ta-te
 - B. Taa-aa
 - C. Taa-aa-aa-aa
 - D. ta-te-taa
25. During Music Festivals, a certain group of performers presented a folk song and the audience understood its message clearly. This was probably due to
- A. many facial expressions
 - B. correct diction
 - C. varied gestures
 - D. high tempo.
26. Which factor is NOT considered when drawing two overlapping cylindrical forms?
- A. Proportion of forms
 - B. Balance of forms
 - C. Variation of lines
 - D. Inadequate space
27. Which one is NOT a 3-D artwork?
- A. sculpture
 - B. pottery
 - C. drawing
 - D. marionette
26. Shakilla wanted to draw a still life drawing. Which one of the following **cannot** be used to draw a still life?
- A. Imagination
 - B. Tracing
 - C. Observation

- D. Memory.
27. Linet was preparing to mount her artwork for an exhibition. Which of the following factors was she **not** likely to consider?
- A. Proper labelling of the artwork.
 - B. Adequate lighting of the exhibition room.
 - C. Good arrangement of the artwork.
 - D. Suitable background music
28. Grade 6 pupils collected the following materials for making a door mat. Which of the following is an artificial material?
- A. Raffia
 - B. Acrylic yam.
 - C. Reed
 - D. Sisal fibre.
29. John was making improvised crayons using bee wax. Which of the following explains why he used two containers when melting the wax?
- A. To prevent fire accidents since wax is flammable.
 - B. To enable the colour to mix well with the wax.
 - C. To melt slowly.
 - D. To ensure consistency in melting.
30. Grade 4 pupils were provided with dye, strings, small stones and a white fabric for a dye and tie lesson. Which of the following techniques of tie and dye were they performing?
- A. Knotting
 - B. Pleating
 - C. Folding
 - D. Stamping
31. A grade 4 pupil was preparing to paint an imaginative composition. However, he noticed that his brush was missing. Which of the following materials would he not use to improvise a paint brush?
- A. Sisal fibre
 - B. Feathers
 - C. A sponge
 - D. Grass.
32. Celestine, a photographer was hired to take photos during a wedding ceremony. Which of the following aspects of photography was she not likely to observe
- A. Centering of the subject
 - B. Proportionality
 - C. Background
 - D. ighting.
33. The following are conventional mounting materials except:-
- A. Banana fibres
 - B. Manilla paper
 - C. Mounting board
 - D. Catridge paper

RELIGIOUS EDUCATION

PART 1: Choose a section you have prepared for. Each section has 15 marks

CHRISTIAN RELIGIOUS EDUCATION

36. Who among the following people worked for 14 years in order to get the girl he loved?
- A. John
 - B. Job
 - C. David
 - D. Jacob.
37. Jesus promised to send His disciples a helper whom he sent on the day of Pentecost. On that day, many people were filled with
- A. tongues
 - B. fire
 - C. holy spirit
 - D. life.
38. In the parable of the good Samaritan, the man who fell into the hands of robbers was going to
- A. Jericho
 - B. Bethany
 - C. Jerusalem
 - D. Samaria.
39. Which one of the following is not part of God's creation?
- A. Water
 - B. Soil
 - C. Car
 - D. Man
40. During the baptism of Jesus, the Holy Spirit came down in form of a
- A. pigeon
 - B. dove
 - C. duck
 - D. raven.
41. During break time, you find your best friend opening your bag without your permission. What is the best action to take?
- A. Report to the teacher.
 - B. Forgive him and tell him to ask for anything he wants.
 - C. Discuss the act with your friends.
 - D. Stop your friendship.
42. The following are reasons why Christians read the Bible. Which one is not? To
- A. strengthen relation hip with God
 - B. get guidance on various issues

- C. strengthen faith in God
 - D. pass exams.
43. Sharing work and resources promotes all the following **except**
- A. love
 - B. unity
 - C. peace
 - D. hatred.
44. Which of the following parables reminds christians never to give up in life? The parable of
- A. the friend at midnight
 - B. Pharisee and the tax collector
 - C. the three servants
 - D. the lost coin.
45. On the way from School, Ali saw two boys fighting. What should he do?
- A. Stop them.
 - B. Report them
 - C. Reconcile them
 - D. Run away.
46. When the first humans disobeyed God, they
- A. were rewarded
 - B. were chased from the Garden of Eden
 - C. reconciled with God
 - D. died.
47. When Moses was taking care of the flock, he saw a burning bush. When he went near it,
- A. he was burned
 - B. a voice told him to take off his shoes
 - C. his stick changed to a snake
 - D. one of the sheep disappeared.
48. The Bible is divided into the Old and the New Testament. How many books does the Old Testament have?
- A. 66
 - B. 27
 - C. 39
 - D. 47
49. When Jonah was sent to Nineveh by God, he disobeyed. What did he do?
- A. He was swallowed by a big fish.
 - B. He escaped to another place.
 - C. God left him alone.
 - D. He stayed at home and did nothing.
50. Which of the following books of the Bible is a prophetic book?
- A. Isaiah
 - B. Mathew
 - C. Genesis

D. 1st kings.

PART 2: ISLAMIC RELIGIOUS EDUCATION 3

36. Which one of the following surahs of the holy Qur'an clearly explains the events of the day of judgement?
- A. Maun
 - B. Nasr
 - C. Zilzala
 - D. Dhuha
37. Grade 5 learners were discussing about the first revelation. Which one of the following surahs did they identify as the first to be revealed?
- A. Fatiha
 - B. Nas
 - C. Falaq
 - D. Alaq
38. When the prophet lost one of his sons, the Quraish mocked him saying that he had been cut off. Which surah did Allah reveal to console him?
- A. Asr
 - B. Kawthar
 - C. Nasr
 - D. Tiyn.
39. How old was the prophet when he lost his mother?
- A. 6 years
 - B. 8 years
 - C. 10 years
 - D. 40 years
40. Which one of the following brings love among the Muslims according to the hadith of the prophet (S.A. W)?
- A. Fasting
 - B. Swalah
 - C. Hajj.
 - D. Greetings
41. Muslims are allowed to take Tayammam when
- A. water is not available
 - B. water is very cold
 - C. one has to buy water
 - D. there is a lot of sand and dust around.
42. Which one of the following statements is **true** about the angels of Allah? They
- A. received books
 - B. preached Islam
 - C. advice Allah
 - D. obeyed the command of Allah,

43. Angels are created from
- A. nar
 - B. clay
 - C. nur
 - D. water...
44. When Hussein was on his way back home, he saw some Muslims who were standing throughout their prayer. Which prayer were they performing?
- A. Eid
 - B. Jum'aa
 - C. Janaza
 - D. Dhuhur.
45. The first muadhlin was called by
- A. Umar
 - B. Bilal
 - C. Abubakar
 - D. Ali.
46. A prophet of Allah was thrown in fire to burn off but Allah (S.W) ordered fire, "***Be cool and safe on my servant'***". This was Prophet
- A. Nuh (A.S)
 - B. Yusuf (A.S)
 - C. Musa (A.S)
 - D. Ibrahim (A.S).
47. How many brothers did Prophet Yusuf (A.S) have?
- A. 11
 - B. 10
 - C. 12
 - D. 13
48. What are Hadith?
- A. Stories of Prophets.
 - B. Sayings of Swahabas.
 - C. The history of Islam.
 - D. Sayings of the Prophet.
49. In the hadith of the prophet, we learn that Allah (S.W) judges people basing on their
- A. actions
 - B. appearance
 - C. wealth
 - D. race.
50. What did Allah promise those men who wear women clothes and women who wear the male clothing according to Hadith?
- A. Reward
 - B. Punishment
 - C. Curse
 - D. Confusion.