

KPSEA 2024 SMART MIND



ALL SUBJECTS



*A Series of Assessment Questions Prepared by Top KNEC
Examiners Nairobi HQ for Academic year 2024.*

FOR MORE MARKING SCHEMES:

Contact

Mr Machuki

0724333200/0795491185/0768321553

Email us on kenyaeducators@gmail.com

Or

Visit our website:

www.kenyaeducators.co.ke

**KENYA EDUCATORS
CONSULTANCY**



KPSEA SMARTMIND PREDICTION

{KENYA PRIMARY SCHOOL EDUCATION ASSESSMENT}

ENGLISH

Time: 1 Hours 40 Minutes

READ THESE INSTRUCTIONS CAREFULLY.

1. You have been given this question booklet and a separate answer sheet. The question bookier contains 30 questions.
2. Do any necessary rough work in this booklet.
3. When you have chosen your answer, mark it on the **ANSWER SHET**, not in the question paper.

HOW TO USE THE ANSWER SHEET.

4. Use an ordinary pencil only.
5. Make sure that you have written on the answer sheet.

YOUR INDEX NUMBER

YOUR NAME

NAME OF YOUR SCHOOL

6. By drawing a **dark line** inside the correct numbered boxes mark your full index number (i.e. school code Number and the three -figure candidate's Number) in the grid near the top of the answer sheet.
7. Do not make any marks outside the boxes.
8. Keep your answer sheet as clean as possible and Do not fold it."
9. For each question 1-30 four answers are given. The answers are lettered A, B, C, D. In each case Only One of the four answers is correct. Chose the correct answer.
10. On the answer sheet show the correct answer by drawing a dark line inside the box in which the letter you have chosen is written.
11. Your dark line Must be within the box. Make your line as dark as possible.
12. For each question **Only One box** is to be marked in each set of four boxes.

Candidates should check the question papers to ensure that all questions are printed.

Read the conversation below and then answer questions 1-5.



Mother : Good evening, son?

Fletcher : __1___. Our teacher told us in order to be a good salesperson you need to have good communication skills. You're a _____ saleswoman, __2__?

Mother : Yes, I am. Mostly you have to be a good communicator in order to succeed.

Fletcher: What does it take to have good conversational skills?

Mother : To have good conversational skills, you need to deliver information in a way that is easy for your target customer to be able to _____ understand easily.

Fletcher: What else can I do?

Mother : For now, focus on improving your English Language by reading more storybooks, watch English movies and note down every _____ new word you learn in a diary.

1. What polite response should Fletcher give his mother?
 - A. Good evening.
 - B. Good afternoon.
 - C. Good evening, mother.
 - D. Yes, mother.
2. What question tag fits the blank space numbered 2?
 - A. are you
 - B. aren't you
 - C. can you
 - D. didn't you.
3. What other name can be used instead of the underlined word customer?
 - A. Client
 - B. Seller
 - C. Victim
 - D. Producer

4. According to the dialogue, the following are ways Fletcher can use to improve his English **except**?
- A. Reading more storybooks.
 - B. Noting down new words.
 - C. Have poor conversational skills.
 - D. Watching English movies.
5. What do you think should Fletcher say at the end of the dialogue?
- A. Good evening mother.
 - B. Thank you for the advice, mother.
 - C. What's for dinner mother?
 - D. Good talk.

Read the following passage and then questions 6 – 9.



Drug use is on the rise among the youth today. Young people experiment with both hard drugs and alcohol. Some claim it gives them a shared experience. Others say drugs help them to calm down. There are those who are tricked into believing that drugs would help them solve whatever problems they have. The end result is getting addicted.


Alcoholism for instance, is a chronic disorder in which a person is unable to refrain from frequent and excessive consumption of alcohol. Excessive drinking damages the liver and leads to liver cirrhosis. The alcoholic has impaired judgement and disturbed sleep.

The government of Kenya has ensured that there is no sale of alcohol for children under the age of 18. In Kenya, it is illegal for minors to consume alcohol. According to the Alcoholic Drinks Control Act 2010, it is an offense for a person to sell, give, or supply alcoholic drinks to a person under the age of 18. It is also an offense for a person under the age of 18 to purchase, attempt to purchase, or consume alcoholic drinks.

Surprisingly we still find some rogue businessmen doing the contrary. This menace of drug and substance use should be fought by everyone. It should not be left to the government alone. We all need a society that will develop tomorrow. We all need leaders tomorrow. We all need a generation after us. For us to achieve all that, we must bring up our children in the right way. They should know that drug and substance use is something to be avoided like the plague.

6. Majority of the youth get into using drugs
- A. knowingly by following in the footsteps of their siblings.
 - B. unconsciously by believing that they have a solution to all their troubles.
 - C. experimenting with everything they come across.
 - D. by watching the celebrities on television.
7. According to the passage, alcoholism is _____
- A. a chronic disorder where one is unable to refrain from consuming alcohol in large amounts.
 - B. a person who drinks an excessive amount of alcohol.
 - C. consumption of drugs and alcohol.
 - D. refraining from taking alcohol.
8. Which one among the following is **not** an effect of alcohol?
- A. Impaired judgement
 - B. Damages the liver.
 - C. Relieving stress.
 - D. Disturbed sleep.
9. It is an offence for a person under the age of 18 to do all the following **except**?
- A. Purchase alcohol.
 - B. Attempt to purchase alcoholic drinks.
 - C. Consume alcoholic drinks.
 - D. Not to purchase alcohol.

Read the passage below and then answer questions 10 – 12.



The lion, the donkey and the zebra were very good friends. They lived together in the forest. They also hunted together and ate together as well. Whenever the lion went out to hunt, her children would be well taken care of. The problem was she did not know who between the zebra and the donkey looked after her cubs. Every time she dared ask; both would respond and say they did. This confused her even more.

To make matters worse, the lion was unable to identify who the donkey was and who the zebra was because they looked so much alike. One day, the lion came up with an idea to paint stripes so that he could tell them apart. He would thereafter hide somewhere in the bush and watch who

actually cared for her cubs. When he did so, all the other donkeys that were in the land felt that their friend the zebra was more beautiful and decided to also paint stripes on themselves.

The hare who did the job for the lion had an idea; he would charge them more. But before he decided on that, he talked to the lion. The lion was not only angry with the hare but also with the donkeys. Eventually the hare charged them double the price and painted them the same way he had done to the zebras. To date, the lion cannot know who is the zebra and which one is the donkey. Their friendship died as well.

10. Why was the lion unable to distinguish between the zebra and the donkey?
 - A. animals looked beautiful.
 - B. They both responded whenever the lion asked a question.
 - C. They looked so much alike.
 - D. They had proved to be caring to the cubs.
11. The words to date have been used to mean
 - A. until now.
 - B. ven today.
 - C. till kingdom come.
 - D. up to when.
12. The best title for the passage above would be
 - A. The lion and the donkey.
 - B. Why zebras have stripes.
 - C. The lion and the zebra.
 - D. The end of the lion, donkey and zebra friendship.

Read the passage below and then answer questions 13-15.

The benefits of being a true sportsperson are many. A successful sportsperson in school gets an opportunity to represent their school at different levels. This builds self-esteem and provides great inspiration to others.

Think of athletes like Eliud Kipchoge, Vivian Cheruiyot, Geoffrey Kamworor to mention just but a few. Do they not inspire you? I believe they do. They all started by participating in sports while in school.

Character and personal growth are other important things you can achieve from sports. Being a true sportsperson requires a great deal of discipline. You mould yourself into becoming the best at what you do. It creates a sense of worth and pride to be a role model to others. One also grows financially. The sports industry is one of the most rewarding industries in the world today. Sportspeople are highly paid, especially when they get to national and international levels.

There is also the benefit of developing teamwork and problem-solving skills. Working to achieve a common goal in a group teaches group discipline and selflessness. You learn to

effectively communicate and reason out the best way for all, as well as to accommodate the views of others.

13. What do we learn about successful sportspersons?
- A. They win in all competitions they participate in.
 - B. They are applauded by their schoolmates.
 - C. they become rich and prosperous.
 - D. They get a chance to represent their school at various levels.
14. Three of the following come as a result of being a good sportsperson except.
- _____
- A. You grow in person and character.
 - B. You only become a team player.
 - C. It creates a sense of worth and pride.
 - D. You grow financially.
15. The passage above talks about _____.
- A. The benefits of sports.
 - B. Representing your school in sports.
 - C. What you get when you run.
 - D. Choosing the career of athletics.

Read the passage below. It contains blank spaces numbered 16 – 20. For each blank space, choose the best alternative from the given four.

Cities __16__ towns like Nairobi tend to have a __17__ mix of culture and __18__ which can help when making new friends and meeting people. Most __19__ are easy to access. Restaurants and cinemas are in __20__ in these busier areas and you often find new attractions will open in a city before anywhere else.

	A	B	C	D
16.	and	with	in	to
17.	more greater	greater	greatest	great
18.	ethnicities	ethnicity	ethnisities	athnicities
19.	amenitis	amenities	amenitits	amenites
20.	scarce	few	rare	plenty

For questions 21-27, choose the best alternative to complete the given sentence.

21. She is a victim _____ circumstances.
- A. for

- B. by
C. with
D. of
22. This is the teacher _____ she called.
A. who
B. whom
C. which
D. what
23. The calf was sleeping in _____ shed.
A. it's
B. its
C. it has
D. their
24. During public holidays, there are _____ cars on most roads.
A. few
B. a few
C. little
D. much
25. " _____ dress over there will have to be mended," said the seamstress.
A. This
B. Those.
C. These.
D. That.
26. Kenny is a _____.
A. big, fierce, Kenyan, brown dog
B. brown, fierce, big, Kenyan dog
C. fierce, big, brown, Kenyan dog
D. fierce, brown, big, Kenyan dog
27. When we were in Mombasa, lunch was served on a _____.
A. round, white, wooden table
B. wooden, white, round table
C. white, round, wooden table
D. round table, white, wooden.

For questions 28 and 29, choose the alternative that means the same as the underlined word(s)

28. The head teacher spoke in very few words.

- A. briefly
- B. angrily
- C. arrogantly
- D. softly

29. The rude boy was punished severely.

- A. polite
- B. tall
- C. impolite
- D. soft-spoken

For question 30, choose the alternative with the correctly punctuated sentence.

30.

- A. "the dog ate my homework," he said.
- B. "The dog ate my homework, he said."
- C. "The dog ate my homework," he said.
- D. "The dog ate my homework" he said.



KPSEA SMARTMIND PREDICTION
{KENYA PRIMARY SCHOOL EDUCATION ASSESSMENT}

ENGLISH COMPOSITION

Time: 40 Minutes

Name.....School.....

Index No.....Date.....

COMPOSITION

Write a letter to your friend telling him or her how you are doing in boarding school.

.....

.....

.....

.....

.....

.....

.....

.....

.....

.....

.....



KPSEA SMARTMIND PREDICTION

{KENYA PRIMARY SCHOOL EDUCATION ASSESSMENT}

INTEGRATED SCIENCE

{Agriculture & Nutrition And Science and Technology}

Time: 1 Hours 40 Minutes

READ THESE INSTRUCTIONS CAREFULLY.

1. You have been given this question booklet and a separate answer sheet. The question bookier contains 50 questions.
2. Do any necessary rough work in this booklet.
3. When you have chosen your answer, mark it on the **ANSWER SHET**, not in the question paper.

HOW TO USE THE ANSWER SHEET.

4. Use an ordinary pencil only.
5. Make sure that you have written on the answer sheet.

YOUR INDEX NUMBER

YOUR NAME

NAME OF YOUR SCHOOL

6. By drawing a **dark line** inside the correct numbered boxes mark your full index number (i.e. school code Number and the three -figure candidate's Number) in the grid near the top of the answer sheet.
7. Do not make any marks outside the boxes.
8. Keep your answer sheet as clean as possible and Do not fold it."
9. For each question 1-50 four answers are given. The answers are lettered A, B, C, D. In each case Only One of the four answers is correct. Chose the correct answer.
10. On the answer sheet show the correct answer by drawing a dark line inside the box in which the letter you have chosen is written.
11. Your dark line Must be within the box. Make your line as dark as possible.
12. For each question **Only One box** is to be marked in each set of four boxes.

Candidates should check the question papers to ensure that all questions are printed.

©KNEC 2024 [Contact 0724333200 for Marking Schemes or Order online
at www.kenyaeducators.co.ke]

1. Milly observed a certain animal which had the following characteristics;
 - i. *It had three pairs of legs.*
 - ii. *It had three body parts.*
 - iii. *It had compound eyes.*
 - iv. *It had a pair of wings and antennae.*Which of the following animals has the characteristics above?
 - A. Ant
 - B. Housefly
 - C. Snail
 - D. Spider.
2. During a Science lesson, Imani taught her classmates on the functions of an ovary. Which one of the following statements is true?
 - A. It produces the female sex cells.
 - B. It is where the embryo develops.
 - C. It receives sperms from the penis.
 - D. It is where fertilization takes place.
3. Otoyoy educated his friends on the ways of conserving water. Which one of the following is not a way in which water is conserved?
 - A. Reusing water.
 - B. Construction of dams.
 - C. Harvesting rain water
 - D. Building gabions.
4. When interacting with computing devices, Mr Omondi likes editing spreadsheet documents. Which of the following is a button used to edit information?
 - A. Clipboard
 - B. Font
 - C. Enter
 - D. Styles
5. Kakuma went out to see flowering plants.. Which one of the following is not a flowering plant?
 - A. Mango
 - B. Maize
 - C. Tomato
 - D. Mushroom
6. Miano was telling his brother of how plants can harm us. Which one of the following is not true?

- A. Some plants prick people with their thorns.
- B. Plants reproduce through pollination.
- C. Some plants are poisonous and can cause death.
- D. Some plants cause an irritation to the skin.

7. Grade 6 learners learned on how to protect themselves from harmful plants. Which one of the following is not a way of protection from harmful plants?

- A. Wearing gloves
- B. Wearing goggles.
- C. Walking barefoot in an area with thorny plants.
- D. Wearing an overcoat.

8. Kongo asked his teacher on the importance of flowering plants. The following are true except they

- A. make the environment beautiful
- B. provide food for human beings and animals
- C. make the environment dirty when the flowers wither
- D. keep the air clean.

9. Esther was carrying out an experiment with acids. She realized that she had substance Z that is a base. Which one of the following is likely to be substance Z?

- A. Wood ash.
- B. Hydrochloric acid
- C. Orange juice.
- D. Lemon juice.

10. Mwema was walking around his farm when he saw a green non-flowering plant. Which one of the following was likely to be the plant?

- A. Beans
- B. Maize
- C. Moss
- D. Mango

11. Linturi and Miano were watching a football game. What is the name given to people watching a football match?

- A. Participan
- B. Coach
- C. Referees

D. Spectators

12. Grade six learners were discussing about air pollution. Which of the following is not an air pollutant?

- A. Aerosol sprays.
- B. Burning plastics.
- C. Broken pieces of glass
- D. Gases from vehicles exhausts.

13. Abdalla wanted to know about the ways he would take care of the community's recreation facilities. Which one of the following is not a way of taking care of the facilities?

- A. Littering.
- B. Finding alternative sources of fuel
- C. Ensuring tree planting is done
- D. Drawing graffiti on walls

14. Otieno and Lydia were playing water games after a swimming class. Which one of the following is a water game?

- A. Bunch start.
- B. Shoulder shrug technique.
- C. C. Freeze tag
- D. Side shuffle

15. David decided to perform an individual balancing. The following are ways in which he performed the balancing except

- A. hand balance
- B. hand balance with split
- C. freeze tag.
- D. hand walk

16. Grade 6 learners went for a camp. They decided to use the following methods to preserve food. Which one of the following is not a method of preserving food?

- A. Smoking
- B. Salting
- C. Drying
- D. Cooking

17. The following are outdoor activities that can be done during camping except?

- A. pitching tents
- B. collecting firewood
- C. loitering around the campsite
- D. serving packed food

18. Which one of the following is not a safety measure for outdoor activities?

- A. Putting off night fires before going to sleep.
- B. Looking for landmarks at the campsite and hikes.
- C. Feeding animals around their tent.
- D. Clearing off any obstacles around the composite

19. Grade 7 learners were having warm up activities for the scissor technique, Which one of the following is not a warm up activity for the scissor technique?

- A. Jumping jacks.
- B. Side shuffles
- C. Lunges
- D. Stretch and spell

20. The Sports officer in Katani village went to inspect the equipment for the upcoming shot-put event. Which one of the following is not a shot-put equipment in the school?

- A. Shot put carriers
- B. Cross bar
- C. Distance marker.
- D. Throwing balls

21. Itindi is planning to practice the scissor technique on Friday. Which one of the following is a phase of the scissor technique?

- A. The flight.
- B. The Stance
- C. Grip
- D. Release

22. Mrs. Doria pointed at the area a shot is put. Which of the following areas did she point?

- A. Throwing ball
- B. Shot put sector
- C. Stance
- D. Shot put

23. Which of the following is **not** a part of the javelin spear?

- A. Metal tip
- B. Cord grip
- C. Javelin rack
- D. Shaft

24. Musyoka is a very talented athlete with a good character. Which one of the following is not an importance of having a good character for a sports person?

- A. It boosts the self-confidence of the sports person.
- B. It allows the sports person have a negative attitude.
- C. It allows achieving of goal
- D. It allows teamwork amongst sports people.

25. Toria wants to use the shoulder shrug technique for a race. At what point should she use the technique?

- A. In the middle of the race.
- B. In the beginning of the race.
- C. When finishing the race
- D. When overtaking competitors

26. Grade 6 learners have all become adolescents. Which one of the following is an emotional change they undergo?

- A. Mood swings.
- B. Growth of pubic hair.
- C. Increase in height and weight.
- D. Breaking of the voice.

27. Mwadime wants to start exercising from Monday. The following are the importance of physical exercise except?

- A. Controlling weight
- B. It improves cardio-respiratory fitness
- C. It increases the risk of getting infections
- D. It reduces anxiety.

28.Kiptoo was experiencing changes in his body. Which one of the following is not a change that occurs in boys?

- A. Growth of an acne.
- B. Growth of beards.
- C. Broadening of shoulders.
- D. Broadening of the hips.

29.Clara wanted to buy cosmetics from a beauty shop. The following are examples of cosmetics except?

- A. Ring
- B. Lipstick
- C. Powder
- D. Lotion

30.Which one of the following is a communicable disease?

- A. Obesity
- B. Cancer
- C. Asthma
- D. Tuberculosis

31.Grade six learners were discussing on dangers of misuse of cosmetics. Which of the following is not a danger of misuse of cosmetics?

- A. Enhance the appearance of the face.
- B. Permanent dark spots.
- C. Falling off of hair
- D. Skin damage

32.Which one of the following is not an importance of budgeting?


- A. It makes us to have no money
- B. Saves time
- C. Helps us save money
- D. Helps use money wisely

33.Opetu and Miano wanted to draft a budget. Which one of the following factors is not considered when making a budget?

- A. The amount of money.
- B. The appearance of the owner.

- C. The expenses
- D. The items to be bought

34. What is the name of invertebrate shown below



- A. Millipede
- B. Centipede
- C. Snake
- D. Caterpillar

35. Evelyn loves wearing decent clothes. All the following are true on the importance of decent dressing. Which one is not?

- A. It helps develop self-respect
- B. Helps develop self-esteem
- C. Makes one look odd
- D. Helps develop self-acceptance.

36. Madam Mugambi asked 4 learners to state the food they had taken during supper the previous night. They stated as follows;

Atieno: Ugali, eggs, kales.

Levis: Chapati, green grams, meat.

Judy: Green bananas, potatoes, avocado.

Juma: Spaghetti, rice, chicken.

Who among the following learners took a balanced diet?

- A. Juma
- B. Levis
- C. Judy
- D. Atieno

37. Grade 6 learners were asked to state ways of preserving cereals and pulses. Which one of the following is not a way of preserving cereals and pulses?

- A. Sun-drying
- B. Use of wood ash
- C. Use of salt
- D. Use of chemicals.

38.Mr Lee listed the following signs and symptoms of a certain nutritional deficiency disease.

- i. Brownish thin hair.
- ii. Swollen body parts like arms, feet and face.
- iii. Sores at the corners of the mouth.
- iv. Protruding belly.

Which disease was he talking about?

- A. Kwashiorkor
- B. Obesity
- C. Rickets
- D. Marasmus.

39.One of the following is a reason why we preserve meat. Which one?

- A. To remove fat
- B. To make it more
- C. To make it tastier
- D. To make it last longer

40.Grade 6 learners were learning about soil erosion. Which of the following best explains the term erosion?

- A. It is the practice of planting trees together with crops.
- B. It is whereby the top soil is made more fertile.
- C. It is the practice of covering crops with grass or leaves.
- D. It is the process where the top soil is gradually removed from one place to another by use of water, wind, animals or human activities.

41.Ngatoi was teaching about the importance of deterrents in a farm. All the following are true about deterrents except

- A. They help us co-exist with wild animals in our environment
- B. Light reflections enable distraction of birds' eyesight to keep them off
- C. Killing animals to keep them away
- D. They help us trap wild animals and release them to the forest for safety.

42.Which of the following is a planting material?

- A. Splits
- B. Fruits
- C. Manure
- D. Ponds

43. A grade 5 pupil was writing down notes on water conservation for plants in nurseries. He wrote down the following points.

- i. *Building of gabions*
- ii. *Terracing*
- iii. *Weeding*
- iv. *Shading.*

Which one of the above was a correct point for the water conservation?

- E. Building of gabions
- F. Terracing
- G. Weeding
- H. Shading

44. Teacher Charles gave grade 6 learners a chart that had information about sunken seed beds. Which one of the following is false about a sunken seed bed?

- A. They are used during the dry season
- B. They are used as nursery bed or seed beds
- C. It allows minimal loss of moisture
- D. They are used only for vegetable seedlings

45. Sakina's granary has been infested with mice. Otumbo suggested the following ways to control the mice.

- i. Using a hand-held gong.
- ii. Using repellent crops.
- iii. Mulching.
- iv. Use of burnt materials.

Which one of the above suggestions is not appropriate?

- I. Using a hand-held gong
- J. Using repellent crops
- K. Mulching
- L. Use of burnt materials.

46. The following are ways of managing creeping crops except by

- A. Watering
- B. Weeding
- C. Mulching
- D. Slashing the crops down.

47. Koine and Tuma went to a farm and spotted climbers like passion fruits and kiwi. What are climbers?

- A. These are plants with strong stems that provide support.
- B. These are plants with long and weak stems that need to be supported to grow upward
- C. They are plants that have fibrous roots
- D. These are plants that grow along the ground.

48. Miriam mounted planting materials used to grow climbing fruits. Which one of the following is matched with its correct planting material?

- A. Berries - Seeds
- B. Gooseberry - Cuttings
- C. Kiwi - Seeds
- D. Passion - Seeds

49. Why should you wear gloves when handling a classmate who is nose bleeding?

- A. To make the hands look smart.
- B. To avoid infections
- C. To keep the hands warm
- D. Fear of seeing blood

50. Which one of the following is not an importance of watering seedlings?

- A. For germination
- B. For moisture
- C. To soften the seed coats
- D. To kill the plant



KPSEA SMARTMIND PREDICTION

{KENYA PRIMARY SCHOOL EDUCATION ASSESSMENT}

KISWAHILI

Muda: Saa 1

SOMA KWA MAKINI MAAGIZO YAFUATAYO.

1. Umepewa kijitabu hiki cha maswali na karatasi ya kujibia. Kijitabu hiki kina maswali 30.
2. Ikiwa utataka kuandika chochote si jibu andika katika kijitabu hiki.
3. Ukisha chaguajibu lako ionyeshe katika KARATASIYAMAJIBU na wala sio katika kijitabu hiki cha maswali.

JINSI YA KUTTIMIÁ KARATASI YA MAJIBU.

4. Tumia penseli ya kawaida. 5. Hakikisha ya kwamba yafuatayo yameandikwa katika karatsi ya majibu.

NAMBARIYAKO YA MTHANI

JINA LAKO



JINA LA SHULE SHULE YAKO

6. Kwa kuchora kistari katika visanduku vyenye namba zinazokuhusu, onyesha namba ako kamili ya mthani yaani namba ya shule, na zile namba tatu za mthaniwa) katika sehemu iliyotengamwanzo wa karatasi ya majibu.
7. Usitie alama zozote nje ya visanduku,,
8. Iweke safi karatasi yako ya maibu.
9. Kwakila swali 1-30 umepewamajibu manne. Majibu'ha o yameonyeshwakwä herufi A, B,D naD. Ni jibu **MOJA** tu kati ya hayo manne ambalo ni sahihi. Chagua jibu hilisi
10. Kwenye karatasi ya majibu,jibu sahihi lionyeshwe kwakuchora kistari katika kisanduku chenye herufi uliyochagua kuwa ndilojibu.
11. Chora kistari chako vizuri. Kistari chako kiwe cheusi na kisijitokeze nje ya kisanduku.
12. Kwakila swali, chora kistari katika kisanduku kimoja tu kati ya visanduku ulivyopewa.

Candidates should check the question papers to ensure that all questions are printed.

Swali la 1 hadi la 5

Soma mazungumzo haya kisha ujibu maswali:



Kaka Mbweha: (*Akicheka kwa kejeli*) Bi. Ngiri, mkulima hodari wa mihogo anayeheshimika katika kanda ki, hujambo?

Bi. Ngiri: (*Akihema kwa uchovu, mzigo alio nao kichwani unaonekana kumlelea*) Sijambo, lakini nina swali. Unacheka nini? Ama ndio njia yako ya kumfariji anayetaka kuchanika kwenye mpini siku nzima?

Kaka Mbweha: (*Anacheka zaidi*) Ati kuchanika kwenye mpini? Wachapa kazi kama mimi hawana haja ya kujichosha. Wanafanya kazi kwa kutumia akili.

Bi. Ngiri: (*Kwa dharau*) Mhhh! Heri nyinyi mabingwa wa kutumia akili. Sisi wengine inabidi tujikaze kisabuni ili tupate riziki.

Kaka Mbweha: (*Akionyesha kushangaa*) Nyinyi wengine! Wewe na kina nani? Je, huna habari kwamba rafikiyo Sungura hapandi wala kuvuna lakini daima ana shibe?

Bi. Ngiri: (*Kwa sauti ya chini*) Hayo ya Sungura hayanihusu ndewe wala sikio. Isitoshe, unavyoona nimechoka. Shamba langu la mihogo liko umbali wa kilomita kumi na tano kutoka kwangu. Bado nina mlima mmoja wa kukwea ndipo nifike. Kaka Mbweha: Haya basi niazime vipande viwili vya mihogo. Nitarejesha nitakapovuna.

Bi. Ngiri: Kaka Mbweha, umesahau kuwa tayari una deni langu la mihogo? Lipa hilo kwanza.

Kaka Mbweha: (*Kwa unyenyekevu*) Nitalipa tu.

Bi. Ngiri: Utanilipa mihogo ilhali hukuvuna? Unastahili kufanya kazi kwa bidii. Kumbuka ajizi ni nyumba ya njaa.

1. Bi. Ngiri anasifika kwa sababu gani?
 - A. Bidii
 - B. Ukulima
 - D. Urafiki
2. Wachapa kazi kama mimi hawana haja ya kujichosha.' Kauli hii inaonyesha tabia gani ya Kaka Mbweha?
 - A. Yeye ni mvivu
 - B. Ana jitihada kazini
 - C. Ana akili
 - D. Ana ukarimu
3. Maneno, 'Tujikaze kisabuni yametumika katika mazungumzo. Ni tamathali gani ya lugha?
 - A. Kitendawili
 - B. Methali
 - C. Nahu
 - D. Tashbihi
4. Wahusika katika mazungumzo haya ni _____
 - A. watu
 - B. Mifugo
 - C. wanyamapori
 - D. ndege
5. Kisawe cha neno kukwea kwa mujibu wa kifungu hiki ni nini?
 - A. Kupanda
 - B. Kushuka
 - C. Kuteremka
 - D. Kupumzika

Swali la 6 hadi la 9

Soma kifungu kifuatacho kisha ujibu maswali.



Siku moja mimi na sahibu yangu Dan tulikuwa tukipalilia mimea kwenye mradi wetu shuleni, Tulipiga gumzo huku tukiipinda migongo yetu. Ghafla bin vuu, sahibu yangu Dan alipasua ukemi. Alikuwa amejidunga kwenye mguu wake wa kulia! Bila kupoteza muda, nilikimbia hadi kwenye ofisi ya mwalimu wa zamu na kumuarifu kilichokuwa kimetokea. Bi Okero, aliyekuwa mwalimu wa zamu alichukua hatua mara moja. Aliwaita maskauti wapatao watatu tukaandamana nao.

Tulipofika alipokuwa ameketi Dan, Bi Okero aliwaelekeza maskauti jinsi ya kumpatia majeruhi huduma ya kwanza. Walichukua kitambaa safi na kufunga jeraha. Damu ilipokoma kutoka waliosha lile eneo kwa maji safi yaliyotiwa chumvi. Kisha walifunga kidonda bandeji na kumpeleka Dan kwenye zahanati iliyokuwa karibu. Tangu siku hiyo niliamua kujiunga na chama cha maskauti.

6. Dan alikuwa akifanya nini alipoumia?
 - A. Akifyeka
 - B. Akinyunyizia mimea maji
 - C. Akiondoa magugu shambani kwa jembe
 - D. Akikata matawi ya mimea
7. Je, ni nini kisichoonyesha kwamba Bi Okero anawajibika?
 - A. Alikuwa katika zamu.
 - B. Alichukua hatua mara moja.
 - C. Aliwaelekeza maskauti kumpa majeruhi huduma ya kwanza.
 - D. Alijiunga na chama cha maskauti.
8. Kisawe cha zahanati ni nini?
 - A. Hospitali
 - B. Kliniki
 - C. Dispensari
 - D. Wadi
9. Bi Okero aliwaelekeza maskauti jinsi ya kumpatia majeruhi huduma ya kwanza.' Je, majeruhi ni nani?
 - A. Mgonjwa mahututi
 - B. Mtu aliyejeruhiwa
 - C. Mtu aliyepata nafuu
 - D. Kiongozi wa maskauti

Swali la 10 hadi la 12

Soma kifungu kifuatacho kisha ujibu maswali.



Baraka alikuwa kiongozi wa kijiji cha Mwanga. Kiongozi huyu alijulikana kwa ushauri wake kwa wanakijiji. Ushauri huu ulilenga zaidi njia bora za kuwekeza. Aliwapenda wanakijiji wake nao wakampenda kwa sababu ya uongozi wake mzuri.

Baraka na wanakijiji walifanya mikutano mara kwa mara. Katika mikutano hii walijadili njia mbalimbali za kuendeleza miradi katika kijiji chao. Umuhimu wa elimu ulisisitizwa. Kwa hivyo, wazazi na walezi waliwapeleka watoto wao shuleni bila kulazimishwa. Walitambua kuwa elimu inaleta heri maishani.

Wakulima walipewa mafunzo kuhusu kilimo bora. Walifundishwa kuhusu kilimo biashara. Walifundishwa kuhusu umuhimu wa kupanda mbegu zinazofaa kwa kila msimu. Waliwekeza katika kilimo wakapata mavuno tele. Wanakijiji walipata chakula cha kutosha. Mavuno ya ziada yaliuzwa. Wanakijiji hawa walipata faida kubwa. Kutokana na pesa walizopata waliendeleza kilimo. Isitoshe, walianzisha miradi ya ufugaji kuku, nyuki na sungura.

Wafanyabiashara nao walipata maarifa ya kuboresha biashara zao. Walianzisha vikundi vya kuweka akiba na kukopeshana pesa. Biashara zao zikaimarika.


Sifa za kijiji cha Mwanga zilienea kote. Wageni kutoka vijiji jirani walikuja kujifunza jinsi ya kujiendeleza. Baraka na wanakijiji waliwapokea na kuwapa maarifa ya kuwekeza.

10. Baraka alijulikana sana kwa sababu gani?
- A. Uwekezaji
 - B. Upendo
 - C. Mawaidha

- D. Uongozi
11. Kwa nini wazazi waliwapeleka watoto wao shuleni?
- A. Umuhimu wa elimu ulisisitizwa katika mikutano
 - B. Walilazimishwa na Baraka
 - C. Walianzisha miradi
 - D. Watoto walijipeleka
12. Wafanyabiashara walianzisha vikundi vya kuweka akiba na kukopeshana pesa.' Neno akiba lina maana gani?
- A. Pesa za ziada anazopata mtu baada ya kuuza kitu.
 - B. Pesa anazochukua mtu kutoka kwa mwingine ili aliye baadaye.
 - C. Pesa anazopata mtu baada ya kufanya biashara.
 - D. Pesa zinazowekwa kwa sababu ya matumizi ya baadaye.

Swali la 13 hadi la 15

Soma kifungu kifuatacho kisha ujibu maswali.



Ng'ombe ni mnyama ambaye anafugwa na binadamu. Mnyama huyu ana manufaa tele kwetu. Kwanza kabisa, huchinjwa ili tupate nyama. Ngozi yake hutumiwa kutengeneza bidhaa kama vile viatu na kanda zinazofungwa viunoni.

Ng'ombe jike hutupatia maziwa. Tunayatumia maziwa kupikia chai na pia kuyanywa. Jibini, ambacho ni chakula kitamu kwetu, hutengenezwa kutokana na maziwa yayo hayo. Mbali na nyama, ngozi na maziwa, Ng'ombe pia huuzwa. Fedha zinazotokana na mauzo hayo huweza kutumika kutimiza mahitaji mbalimbali. Fahali nao huenda wakatumiwa kulima mashambani. Isitoshe, tunaipata samadi kutoka kwa Ng'ombe. Samadi huweza kutumiwa kama mbolea.

13. Ni manufaa mangapi ya ng'ombe yaliyotajwa katika kifungu hiki?
- A. Saba
 - B. Sita

- C. Kumi
D. Matano
14. Kulingana na kifungu hiki ni ng'ombe yupi hutumiwa kulima?
A. Wa kike
B. Wa kiume
C. Ndama
D. Wa kike na wa kiume
15. Kati ya vitu hivi ni gani hatupati kutoka kwa ng'ombe wa kiume?
A. Samadi
B. Nyama
C. Ngozi
D. Maziwa

Swali la 16 hadi la 20

Soma kifungu kifuatacho. Kina nafasi 16 mpaka 20. Kwa kila nafasi umepewa majibu manne. Chagua jibu lifaalo zaidi kati ya yale uliyopewa.

Timu ya Bingwa ilishinda mechi ya fainali. Ushindi ___16___ ulitokana na ushirikiano au ___17___ waokatika mazoezi. Wachezaji wote walikuwa wenye bidii ___18___ mchwa. Baada ya mechi, wachezaji waliondoka uwanjani wakishangiliwa na ___19___ Timu pinzani ___20___ wao katika kwamba imepoteza mechi hiyo.

	A	B	C	D
16	yao	wao	kwao	mwao
17	utaratibu	utengano	umoja	uzalendo
18	kama	kama vile	kwa sababu	kuliko
19	refa	golikipa	walinzi	mashabiki
20	haijaamini	haitaamini	haiamini	haikuamini

Swali la 21 hadi la 30

Chagua jibu sahihi.

21. Chagua sentensi ambayo ina maneno yenye silabi tatanishi.
- A. Uga ule umenyunyiziwa unga wa chokaa.
 - B. Sisi tunapenda kwenda pwani likizoni.
 - C. Jungu alilopikia nyama juzi limesafishwa.
 - D. Wale wamechuma maua na kuyauza mbali.
22. Zifuatazo ni jozi za maneno. Ni jozi gani iliyo na vimilikishi?
- A. Huyu, yule
 - B. Changu, lake
 - C. Tatu, tele
 - D. Bora, hodari.
23. Chagua neno ambalo linapatikana katika ngeli ya U - I:
- A. Mkebe
 - B. Mtoto
 - C. Unywele
 - D. Meza
24. Katika kamusi, maneno hupangwa kulingana na herufi za alfabeti. Kati ya Maneno haya ni gani litakuja mwanzo?
- A. Gongu
 - B. Ganda
 - C. Gamba
 - D. Godoro
25. Kati ya sentensi hizi, ni gani haina kiwakilishi?
- A. Mimi huenda shuleni kila siku.
 - B. Huyu anasoma kwa bidi.
 - C. Watano watapeleka zawadi.
 - D. Viatu vitatu vimeoshwa.
26. Andika sentensi ifuatayo katika wingi. Wavu wa mvuvi unastahili kuwa na shimo kubwa.
- A. Nyavu za mvuvi zinastahili kuwa na shimo kubwa.
 - B. Wavu wa wavuvi unastahili kuwa na mashimo makubwa.
 - C. Nyavu za wavuvi zinastahili kuwa na shimo kubwa.
 - D. Nyavu za wavuvi zinastahili kuwa na mashimo makubwa.
27. Kanusha sentensi ifuatayo: Maseremala watatutengenezea madawati.
- A. Maseremala hawatatutengenezea madawati.
 - B. Maseremala hawajatutengenezea madawati.
 - C. Maseremala hawakututengenezea madawati.
 - D. Maseremala hawatutengenezei madawati.
28. Andika sentensi ifuatayo katika hali ya ukubwa. Mlango ulipakwa rangi ukapendeza.
- A. Malango yalipakwa rangi yakapendeza.
 - B. Kilango kilipakwa rangi kikapendeza.

- C. Lango lilipakwa rangi likapendeza.
 - D. Milango ilipakwa rangi ikapendeza.
29. Umesimuliwa hadithi na mlezi wako. Sasa ni wakati wa kulala. Chagua maagano utakayotumia kumuaga mlezi wako.
- A. Kwaheri
 - B. Alamsiki
 - C. Buriani
 - D. Safiri salama
30. Chagua methali isiyohusu malezi.
- A. Mtaka cha mvunguni sharti ainame
 - B. Mtoto akibebwa hutazama kisogo cha nina.
 - C. Mtoto umleavyo ndivyo akuavyo.
 - D. Asiyefunzwa na mamaye hufunzwa na ulimwengu



KPSEA SMARTMIND PREDICTION
{KENYA PRIMARY SCHOOL EDUCATION ASSESSMENT}

KISWAHILI INSHA

Muda: Dakika 40

INSHA

Andika insha kuhusu:

Barua rasmi kwa mwalimu anayesimamia chama cha mazingira ukimwomba nafasi ya kujiunga na chama hicho.

Blank lined paper for writing.



KPSEA SMARTMIND PREDICTION

{KENYA PRIMARY SCHOOL EDUCATION ASSESSMENT}



MATHEMATICS

Time: 1 Hours 40 Minutes

READ THESE INSTRUCTIONS CAREFULLY.

1. You have been given this question booklet and a separate answer sheet. The question bookier contains 30 questions.
2. Do any necessary rough work in this booklet.
3. When you have chosen your answer, mark it on the **ANSWER SHET**, not in the question paper.

HOW TO USE THE ANSWER SHEET.

4. Use an ordinary pencil only.
5. Make sure that you have written on the answer sheet.

YOUR INDEX NUMBER

YOUR NAME

NAME OF YOUR SCHOOL

6. By drawing a **dark line** inside the correct numbered boxes mark your full index number (i.e. school code Number and the three -figure candidate's Number) in the grid near the top of the answer sheet.

7. Do not make any marks outside the boxes.

8. Keep your answer sheet as

clean as possible and Do not fold it."

9. For each question 1-30 four answers are given. The answers are lettered A, B, C, D. In each case Only One of the four answers is correct. Chose the correct answer.

10. On the answer sheet show the correct answer by drawing a dark line inside the box in which the letter you have chosen is written.


11. Your dark line Must be within the box. Make your line as dark as possible.

12. For each question **Only One box** is to be marked in each set of four boxes.

Candidates should check the question papers to ensure that all questions are printed.

1. A football match at Kasarani stadium was watched by five hundred and eight thousand, three hundred and seventy four people. How many people watched the match in symbols?
 - A. 58374
 - B. 508374
 - C. 580374
 - D. 548370
2. A farmer planted 48 seedlings in 7 rows. Round off the product of 48 and 7 to the nearest 10?
 - A. 336
 - B. 324
 - C. 330
 - D. 340
3. A grade 5 learner listed the numbers below. Which of the following numbers is not divisible by 9?
 - A. 72
 - B. 81
 - C. 59
 - D. 63
4. Kelvin had 9 bananas and 12 oranges. What is the highest number of friends that he could equally share the foods?
 - A. 12
 - B. 3
 - C. 36
 - D. 21
5. The digits 4 and 2 in the number 4 582 are interchange to form a new number. What is the difference between 4 582 and the new number formed?
 - A. 1998
 - B. 2002
 - C. 2098
 - D. 1996
6. James wrote the number pattern below. 7, __21, 28, 35, __, 49 What is the sum of the missing numbers in the pattern above?
 - A. 14
 - B. 42
 - C. 56
 - D. 7
7. A factory sold 345346 kg of maize flour in February and 25337 kg of maize flour in May. How many kilograms did the company sell altogether?
 - A. 320009kg

- B. 370681kg
C. 370683kg
D. 360673kg
8. George bought a second-hand car for sh. 154920. He spent sh. 23700 on repairs. How much money did he spend altogether?
A. Sh.178620
B. Sh.177620
C. Sh.131220
D. Sh.187620
9. A fun day at a school was attended by 900 people. 427 of the attendees were adult females and 103 were adult males. How many children attended the fun day?
A. 520
B. 420
C. 370
D. 473
10. A train has 16 coaches. Each coach carries 672 people. How many people do the train carry in a day?
A. 10752
B. 9342
C. 7683
D. 11252
11. A lorry was used to transport 320 pieces of timber to the workshop per trip. If the lorry made 14 trips, how many pieces of timber did it transport altogether?
A. 4480
B. 4408
C. 334
D. 70
12. Below is Kambu's farm. He used three strands of barbed wire to fence the farm. What length of the barbed wire did he use?

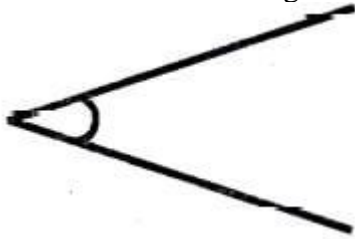


- A. 438m
B. 126m
C. 258m
D. 246m
13. A company employed 680 employees. The company shared them equally among 40 groups. How many employees were in each group?
A. 17
B. 34
C. 62
D. 28

14. A fruit vendor spent sh.1475 to buy fruits. She bought a total of 59 fruits. How much did each fruit cost?
- A. Sh. 25
 - B. Sh. 35
 - C. Sh.40
 - D. Sh. 61
15. There were 48 apples in a basket. A teacher shared the apples equally among 12 learners. How many apples did each learner get in Roman numerals?
- A. X
 - B. IX
 - C. IV
 - D. VI
16. After a. athletic competition, 56 litres of Juice was prepared for the athletes. If they drank 39 litres of the juice, how much juice remained in millilitres?
- A. 17 ml
 - B. 170 ml
 - C. 17 000 ml
 - D. 1 700 ml
17. Grade 6 learners were required to rearrange the following numbers in an ascending order. Which of the following is the correct order
- A. 155755, 157555, 155575, 155557
 - B. 155557, 155575, 155755, 157555
 - C. 157555,155575,155755,155557
 - D. 155755,155575,157555,155557
18. Sixty-five thousand, one hundred and fifty bags of beans were harvested in a certain season. If thirty five thousand, seven hundred were consumed, how many bags of beans remained?
- A. 30650
 - B. 29450
 - C. 90850
 - D. 20650
19. Aisha bought $\frac{1}{4}$ kg of margarine and $\frac{1}{2}$ kg of rice. What was the total mass of the two products?
- A. $\frac{3}{4}$ kg
 - B. $\frac{2}{6}$ kg
 - C. $\frac{1}{4}$ kg
 - D. $\frac{1}{6}$ kg
20. Grade 5 learners made following numbers cards. Which one of the following is a multiple of 3?
- A. 520
 - B. 507
 - C. 80

D. 97

21. Mr Hisabati drew an angle like the one shown below.



What is the name of the angle?

- A. Obtuse angle.
 - B. Reflex angle.
 - C. Acute angle.
 - D. Right angle.
22. Richard bought $8\frac{1}{4}$ kg of meat. His wife cooked $2\frac{3}{4}$ kg of it. What amount of meat remained?
- A. $4\frac{1}{2}$ kg
 - B. 6kg
 - C. 11kg
 - D. $5\frac{1}{2}$ kg
23. Ruben wrote the factors below. Which of the following are factors of 81?
- A. $2 \times 3 \times 4 \times 5$
 - B. $3 \times 3 \times 3 \times 3$
 - C. $2 \times 2 \times 2 \times 3$
 - D. $2 \times 3 \times 7$
24. During group discussion, learners were provided with the following numbers cards. 5,7,9,2,3 Which is the smallest 5-digit number that one can create from the numbers above?
- A. 92752
 - B. 75923
 - C. 23579
 - D. 32795
25. Faith stayed with her mother over the holiday for a week. How many hours did she stay with her mother?
- A. 48 hours
 - B. 148 hours
 - C. 168 hours
 - D. 84 hours
26. Gift bought three trays of eggs for her business. On her way home, ten eggs broke. How many eggs was she left with? [a tray has 30 eggs]
- A. 27
 - B. 90

- C. 60
- D. 80

The table below shows the number of animals in the Nairobi animal orphanage. Use the table below to answer questions 27 to 29

Zebra	Elephant	Giraffe	Buffalo
247	89	164	431

- 27. What is the difference between the number of buffalo and elephants in the orphanage?
 - A. 342
 - B. 458
 - C. 520
 - D. 158
- 28. What is the sum of total population of the Zebra and Giraffe?
 - A. 301
 - B. 123
 - C. 83
 - D. 411
- 29. What is the total population of animals in the animal orphanage?
 - A. 336
 - B. 595
 - C. 931
 - D. 767
- 30. Gelindah has t cows, 24 goats and 17 sheep in his farm. Which of the following correctly represents the sum of animals in the farm?
 - A. $t+17$
 - B. $t + 24 - 17$
 - C. $t - 24 + 17$
 - D. $t + 41$



KPSEA SMARTMIND PREDICTION

{KENYA PRIMARY SCHOOL EDUCATION ASSESSMENT}

CREATIVE ARTS, SOCIAL STUDIES & RELIGIOUS EDUCATION

Time: 1 Hours 40 Minutes

READ THESE INSTRUCTIONS CAREFULLY.

1. You have been given this question booklet and a separate answer sheet. The question bookier contains 50 questions.
2. Do any necessary rough work in this booklet.
3. When you have chosen your answer, mark it on the **ANSWER SHET**, not in the question paper.

HOW TO USE THE ANSWER SHEET.

4. Use an ordinary pencil only.
5. Make sure that you have written on the answer sheet.

YOUR INDEX NUMBER

YOUR NAME

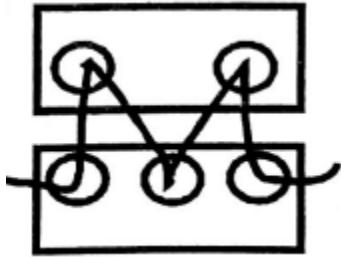
NAME OF YOUR SCHOOL

6. By drawing a **dark line** inside the correct numbered boxes mark your full index number (i.e. school code Number and the three -figure candidate's Number) in the grid near the top of the answer sheet.
7. Do not make any marks outside the boxes.
8. Keep your answer sheet as clean as possible and Do not fold it."
9. For each question 1-50 four answers are given. The answers are lettered A, B, C, D. In each case Only One of the four answers is correct. Chose the correct answer.
10. On the answer sheet show the correct answer by drawing a dark line inside the box in which the letter you have chosen is written.
11. Your dark line Must be within the box. Make your line as dark as possible.
12. For each question **Only One box** is to be marked in each set of four boxes.

Candidates should check the question papers to ensure that all questions are printed.

©KNEC 2024 [Contact 0724333200 for Marking Schemes or Order online
at www.kenyaeducators.co.ke]

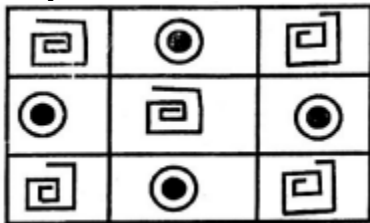
1. The process of joining these two pieces of leather is called:



- A. beading
B. etching
C. thonging
D. hemming
2. Three of the following are benefits of songs except. Songs

people.

- A. educate
B. entertain
C. console
D. accuse
3. Erick used the printed fabric shown below to decorate a book cover. How many motif have been used?



- A. Three
B. Two
C. Nine
D. Six
4. Which of the following is an upper case letter?
- A. a
B. b
C. H
D. g

5. A person who manipulates and control puppet is called:-

A. marionette
B. puppeteer
C. magician
D. acrobat

6. Which of the following is not a principal of art?

A. Balance
B. Tonal value
C. Proportion
D. Overlapping

7. The following materials are used in painting except:-

A. Pencil
B. Crayon
C. Thread
D. Brush


8. Sarah, a grade five learner drew a hut on a hard carton. She then applied glue and mounted rice on the drawing. Sarah was making a

A. mosaic
B. motif
C. collage
D. montage

9. Which colour do you get when you mix red and yellow?

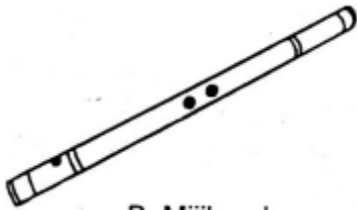
A. Green
B. Violet
C. Orange
D. White

10. The pattern below is used in weaving. It is called:-



A. twinning
B. splitting

- C. plaiting
 - D. plain weaving
11. The pattern above can be used to decorate a
- A. mat
 - B. pot
 - C. sufuria
 - D. T.V
12. Wind instruments are played by:-
- A. plucking
 - B. blowing
 - C. hitting
 - D. shaking
13. Special clothes that are worn when performing folk songs are called:-
- A. uniform
 - B. costumes
 - C. adornment
 - D. decoration
14. Which community uses the instrument below?



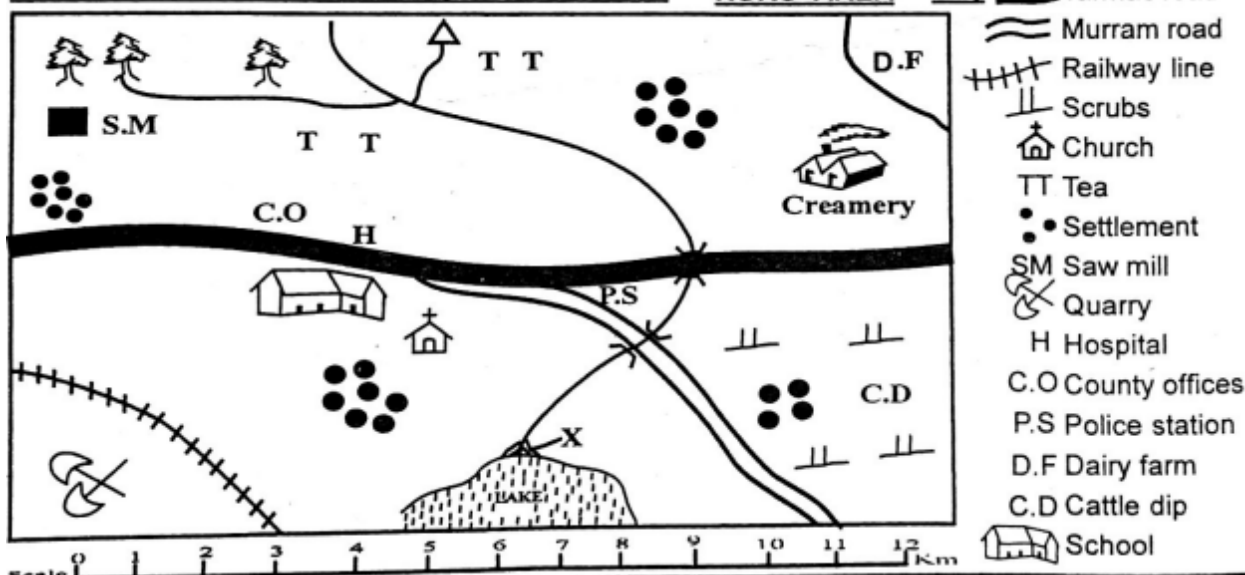
- A. Kalenjin
 - B. Mijikenda
 - C. Akamba
 - D. Teso
15. Which of the following types of song is correctly matched with the community it comes from?

- A. Ramogi - Akamba
 - B. Isikuti - Luo
 - C. Mwomboko - Agikuyu
 - D. Kilumi - Luhya
16. Which of the following materials can be used to make a dancing skirt?
- A. Clay soil
 - B. Tree leaves
 - C. Manilla paper
 - D. Sisal fibres
17. What is the use of adhesives when mounting an artwork?
- A. Decoration.
 - B. Exhibition.
 - C. Sticking.
 - D. Cutting.
18. The speed of a song is called:-
- A. tempo
 - B. pitch
 - C. rhythm
 - D. volume
19. "Natujenge taifa letu". This statement is found in the:-
- A. East Africa Anthem
 - B. Sacred song
 - C. Topical song
 - D. Kenya National Anthem
20. A piece of song performed by two people is called:-
- A. duet
 - B. solo
 - C. choral
 - D. trio

Use the map below to answer questions 21 - 25

NURU AREA

Key



21. Which pattern is formed by the population | 25 distribution in Nuru Area?

- A. nucleated
- B. sparse
- C. dense
- D. linear

22. Nuru area is headed by:-

- A. Assistant County Commissioner
- B. Deputy County Commissioner
- C. Governor
- D. Chief

23. The climate experienced in the Northern part of Nuru area is :-

- A. cool and wet
- B. hot and wet
- C. cool and dry
- D. hot and dry

24. The feature marked x is called:-

- A. estuary
- B. delta
- C. confluence
- D. tributary

25. Which economic activity is not carried out in Nuru Area?

- A. Lumbering
- B. Farming
- C. Tourism
- D. Mining

26. Which of the following groups consists of the plain nilotes in Kenya?

- A. Agikuyu, Dawida, Abakuria
- B. Maasai, Samburu, Turkana
- C. Somali, Boran, Rendille
- D. Arabs, Nubians, Indians

27. A school routine is normally shown on

- A. a timetable.
- B. an exercise book cover.
- C. the school uniform.
- D. the school gate.


28. Equatorial climate is always:-

- A. hot and wet
- B. hot and dry
- C. cool and wet
- D. cool and dry

29. On 12th December, Kenyans celebrate:-
 A. Madaraka day
 B. Labour day
 C. Jamhuri day
 D. Mashujaa day
30. Which of the following minerals is **correctly** matched with the place it is found?
 A. Soda ash - Magadi
 B. Diatomite - Malindi
 C. Salt - Kariandusi
 D. Oil - Nakuru
31. One of the crops below is grown in the subsistence farms. Which is it?
 A. Tea
 B. Flowers
 C. Kales
 D. Coffee
32. Which of the following is a quality of a good leader?
 A. Dishonest
 B. Caring
 C. Cruel
 D. Unjust
33. Chege a grade five pupil has been employed in a hotel. The hotel owner is practising:-
 A. Child labour
 B. Early marriage
 C. Good citizenship
 D. Child right
34. Who among the following traditional leaders practised long distance trade?
 A. Mekatilili wa menza
 B. Njuri Ncheke
 C. Oloibon Lenana
 D. Chief Kivoi Mwendwa
35. Which of the following economic activities is **correctly** matched with the symbol it represents?
 A. Saw mill-fishing
 B. Tea- transport

- C. Quarry - mining
 D. Road - farming
36. Identify a historic built environment in Kenya.
 A. Wilson airport
 B. River Tana
 C. Mount Kenya
 D. Fort Jesus
37. Which is the largest country in Eastern Africa?
 A. Tanzania
 B. Sudan
 C. Somalia
 D. Djibouti

Use the diagram below to answer questions 38 and 39



38. The fishing method illustrated above is
 A. trawling.
 B. net drifting.
 C. harpooning.
 D. purse-seining.
39. The fishing method above is used where
 A. water is flowing fast.
 B. there are few fish.
 C. a river is shallow.
 D. the sea is deep.
40. How many basketfuls of food were left after Jesus fed the multitude?
 A. 24
 B. 10
 C. 3

- D. 12
41. Which is the **correct** way of using social media?
- A. Accusing others
 - B. Watching nakedness
 - C. Sending greetings to friends
 - D. posting immoral pictures
42. Otieno wakes up very early every Sunday to arrange chairs in their church. Otieno demonstrates:-
- A. responsibility
 - B. courage
 - C. holiness
 - D. loneliness
43. Who raised the Jairus daughter from death?
- A. Peter
 - B. Jesus
 - C. Elisha
 - D. Paul
44. Which of the following is **not** one of the books in the Bible?
- A. Genesis
 - B. Exodus
 - C. Gideon
 - D. Samuel
45. Who among the following grade six learners used his/her free time well during the December holiday?
- A. Ken- went to steal fruits from a nearby farm
 - B. Eliud - went to fetch water for an old lady
 - C. Tom was given a ride by a stranger
 - D. Betty-talking with her friends about others
46. One of the Ten commandments tells us to honour our parents because:-
- A. they give us food
 - B. we can live long on earth
 - C. we can avoid being cursed
 - D. they may refuse to pay our school fees
47. "Do not accuse anyone falsely". Which lesson do Christians learn from this statement?The importance of being:-
- A. obedient
 - B. kind
 - C. loving
 - D. truthful
48. Eve was created by God as a _____ of Adam.
- A. servant
 - B. caretaker
 - C. helper
 - D. enemy
49. Which of the following prophets challenged the prophet of Baal at Mt. Carmel by bringing fire from heaven?
- A. Jeremiah
 - B. Daniel
 - C. Elijah
 - D. Isaiah
50. Which of the following prophets challenged the prophet of Baal at Mt. Carmel by bringing fire from heaven?
- A. Jeremiah
 - B. Daniel
 - C. Elijah
 - D. Isaiah